



NAPLAN INTERACTIVE

2018 NUMERACY

YEAR 3

KILBAHA MULTIMEDIA PUBLISHING
PO BOX 2227
KEW VIC 3101
AUSTRALIA

TEL: (03) 9018 5376
FAX: (03) 9817 4334
kilbaha@gmail.com
<http://kilbaha.com.au>



NAPLAN INTERACTIVE

IMPORTANT COPYRIGHT NOTICE

- This material is copyright. Subject to statutory exception and to the provisions of the relevant collective licensing agreements, no reproduction of any part may take place without the written permission of Kilbaha Pty Ltd.
- The contents of this work are copyrighted. Unauthorised copying of any part of this work is illegal and detrimental to the interests of the author.
- For authorised copying within Australia please check that your institution has a licence from <http://www.copyright.com.au>. This permits the copying of small parts of the material, in limited quantities, within the conditions set out in the licence.
- All of these pages must be counted in Copyright Agency Limited (CAL) surveys
- This file must not be uploaded to the Internet.

While every care has been taken, no guarantee is given that these questions and answers are free from error. Please contact us if you believe you have found an error.

CAUTION NEEDED!

All Web Links when created linked to appropriate Web Sites. Teachers and parents must always check links before using them with students to ensure that students are protected from unsuitable Web Content. Kilbaha Multimedia Publishing is not responsible for links that have been changed in this document or links that have been redirected.

KILBAHA MULTIMEDIA PUBLISHING
PO BOX 2227
KEW VIC 3101
AUSTRALIA

TEL: (03) 9018 5376
FAX: (03) 9817 4334
kilbaha@gmail.com
<http://kilbaha.com.au>



NAPLAN INTERACTIVE

1. Type your Name in the space above.
2. Carefully read each question.
3. Select the answer that is correct or best answers the question.
4. Type the answer that is correct or best answers the question.
5. Click in the **green box** to lock in your answer.

KILBAHA MULTIMEDIA PUBLISHING
PO BOX 2227
KEW VIC 3101
AUSTRALIA

TEL: (03) 9018 5376
FAX: (03) 9817 4334
kilbaha@gmail.com
<http://kilbaha.com.au>



<p>2018 NUMERACY</p>	<p>YEAR 3 Trial Test</p>
--------------------------	----------------------------------

0:45

Time available for students to
complete test: 45 minutes

3 Meg has 10 sheep, 2 horses and 7 cows on her farm. How many animals are on her farm?




















16

17

19

20

36 Claire counted the number of birds that she saw during one week. The following table shows her results.

Sunday				
Monday				
Tuesday				
Wednesday				
Thursday				
Friday				
Saturday				

In each picture above,  = 4 birds.

How many more birds did Claire see on Friday than Tuesday?

Write your answer in the box.

End of 2018 NAPLAN Trial Test
Numeracy Year 3

KILBAHA MULTIMEDIA PUBLISHING
PO BOX 2227
KEW VIC 3101
AUSTRALIA

TEL: (03) 9018 5376
FAX: (03) 9817 4334
kilbaha@gmail.com
<http://kilbaha.com.au>



NAPLAN INTERACTIVE

2018 NUMERACY

YEAR 3

You answered

questions correctly.



NAPLAN INTERACTIVE

2018 NUMERACY - YEAR 3

Question	Answer	Question	Answer	Question	Answer	Question	Answer	Question	Answer
Q1		Q9		Q17		Q25		Q33	
Q2		Q10		Q18		Q26		Q34	
Q3		Q11		Q19		Q27		Q35	
Q4		Q12		Q20		Q28		Q36	
Q5		Q13		Q21		Q29			
Q6		Q14		Q22		Q30			
Q7		Q15		Q23		Q31			
Q8		Q16		Q24		Q32			