

Buy and download immediately at <https://kilbaha.com.au>

Kilbaha Education PO Box 2227 Kew Vic 3101 Australia Tel: +613 9018 5376 Email: kilbaha@gmail.com Web1: https://kilbaha.com.au Web2: https://naplan.blogspot.com	Bill Healy BSc BA Dip Ed CEO Mobile: +61 (0)413 425 374
---	---



Kilbaha Education

Quality educational content

2021 Catalogue Mathematics

Kilbaha Pty Ltd (Est. 1978)
ABN: 47 065 111 373

Quality resources to schools and students since 1978

- Kilbaha helps schools
- to teach better
- by providing quality educational content
- so that students get higher grades.

For complete catalogue always go to <https://kilbaha.com.au/kilbaha.pdf>

Buy and download immediately at <https://kilbaha.com.au>

Kilbaha VCE Mathematics Trial Examinations Current Study Design (2016-2022)

Kilbaha Education (Est. 1978) (ABN 47 065 111 373) PO Box 2227 Kew Vic 3101 Australia	Tel: (03) 9018 5376 Email: kilbaha@gmail.com Web: https://kilbaha.com.au
--	--

SCHOOL ORDER NUMBER (required) _____ DATE _____

NAME _____

SCHOOL _____

ADDRESS _____

POSTCODE _____ TEL _____

EMAIL _____

Please mark (X) those required.

<ul style="list-style-type: none">• Kilbaha VCE Mathematics Trial Examinations for Units 3 and 4 with detailed answers.• All files are provided in WORD format for easy editing and PDF format for easy printing.• All of these Trial Exams are for the current Study Design (2016-2022) (2020 was modified)• School site licence for distribution to students in both printed and electronic formats		
2021 VCE Further Mathematics Units 3 and 4 Trial Exam 1 (VCAA approved technology)		\$85
2021 VCE Further Mathematics Units 3 and 4 Trial Exam 2 (VCAA approved technology)		\$85
2021 VCE Mathematical Methods Units 3 and 4 Trial Exam 1 (technology free)		\$85
2021 VCE Mathematical Methods Units 3 and 4 Trial Exam 2 (VCAA approved technology)		\$85
2021 VCE Specialist Mathematics Units 3 and 4 Trial Exam 1 (technology free)		\$85
2021 VCE Specialist Mathematics Units 3 and 4 Trial Exam 2 (VCAA approved technology)		\$85
2016, 2017, 2018, 2019, 2020 VCE Further Mathematics Units 3 and 4 Trial Exams 1 Five different, complete Trial Exams with detailed answers.		\$85
2016, 2017, 2018, 2019, 2020 VCE Further Mathematics Units 3 and 4 Trial Exams 2 Five different, complete Trial Exams with detailed answers.		\$85
2016, 2017, 2018, 2019, 2020 VCE Mathematical Methods Units 3 and 4 Trial Exams 1 Five different, complete Trial Exams with detailed answers.		\$85
2016, 2017, 2018, 2019, 2020 VCE Mathematical Methods Units 3 and 4 Trial Exams 2 Five different, complete Trial Exams with detailed answers.		\$85
2016, 2017, 2018, 2019, 2020 VCE Specialist Mathematics Units 3 and 4 Trial Exams 1 Five different, complete Trial Exams with detailed answers.		\$85
2016, 2017, 2018, 2019, 2020 VCE Specialist Mathematics Units 3 and 4 Trial Exams 2 Five different, complete Trial Exams with detailed answers.		\$85

Total Amount = \$ _____ (All prices include GST)

Email to kilbaha@gmail.com

2021 Kilbaha QCAA External Assessment Mathematics Trial Exams and Detailed Answers

Kilbaha Education (Est. 1978) (ABN 47 065 111 373) PO Box 2227 Kew Vic 3101 Australia	Tel: +613 9018 5376 Email: kilbaha@gmail.com Web: https://kilbaha.com.au
--	---

SCHOOL ORDER NUMBER (required) _____ **DATE** _____

NAME _____

SCHOOL _____

ADDRESS _____

POSTCODE _____ **TEL** _____

EMAIL _____

Please mark (X) those required.

- **2021 Kilbaha QCAA External Assessment Mathematics Trial Examinations with detailed answers.**
- All files are provided in WORD format for easy editing and PDF format for easy printing.
- All of these new Trial Exams are for the current Syllabi.
- School site licence for distribution to students in both printed and electronic formats
- These trial examinations have no connection with and are not endorsed by the QCAA

2021 QCAA Mathematical Methods Trial Examination Paper 1 (90 minutes + 5 minutes)	\$90
2021 QCAA Mathematical Methods Trial Examination Paper 2 (90 minutes + 5 minutes)	\$90
2021 QCAA Specialist Mathematics Trial Examination Paper 1 (90 minutes + 5 minutes)	\$90
2021 QCAA Specialist Mathematics Trial Examination Paper 2 (90 minutes + 5 minutes)	\$90

- **Detailed answers to the 2020 QCAA External Assessment Examinations.**
- All files are provided in WORD format for easy editing and PDF format for easy printing.
- School site licence for distribution to students in both printed and electronic formats.
- These detailed answers have no connection with and are not endorsed by the QCAA.

Detailed answers to the 2020 QCAA Mathematical Methods External Assessment Examination Paper 1	\$20
Detailed answers to the 2020 QCAA Mathematical Methods External Assessment Examination Paper 2	\$20
Detailed answers to the 2020 QCAA Specialist Mathematics External Assessment Examination Paper 1	\$20
Detailed answers to the 2020 QCAA Specialist Mathematics External Assessment Examination Paper 2	\$20

Total Amount = \$ _____ **(All prices include GST)**

Email to kilbaha@gmail.com

Buy and download immediately at <https://kilbaha.com.au>

Detailed answers 2021 VCAA VCE Mathematics Exams on a Northern Hemisphere Timetable (NHT)

Download the NHT VCAA Exams here.
<https://bit.ly/2VaKSpE>

Kilbaha Education (Est. 1978) (ABN 47 065 111 373) PO Box 2227 Kew Vic 3101 Australia	Tel: (03) 9018 5376 Email: kilbaha@gmail.com Web: https://kilbaha.com.au
--	---

SCHOOL ORDER NUMBER (required) _____ **DATE** _____

NAME _____

SCHOOL _____

ADDRESS _____

POSTCODE _____ **TEL** _____

EMAIL _____

Please mark (X) those required.

	Detailed answers 2021 VCAA VCE Mathematics Exams on a Northern Hemisphere Timetable (NHT) <i>These are Digital Publications supplied in both PDF and WORD formats with a school site licence to reproduce for students in both print and electronic formats.</i>	Price
	Detailed answers to the 2021 VCAA VCE Mathematical Methods Exam 1 NHT	\$20
	Detailed answers to the 2021 VCAA VCE Mathematical Methods Exam 2 NHT	\$20
	Detailed answers to the 2021 VCAA VCE Specialist Mathematics Exam 1 NHT	\$20
	Detailed answers to the 2021 VCAA VCE Specialist Mathematics Exam 2 NHT	\$20

Total Amount = \$ _____ **(All prices include GST)**

Email to kilbaha@gmail.com

Buy and download immediately at <https://kilbaha.com.au>

Detailed Answers

VCAA VCE Mathematics Examinations

Kilbaha Education (Est. 1978) (ABN 47 065 111 373) PO Box 2227 Kew Vic 3101 Australia	Tel: (03) 9018 5376 Email: kilbaha@gmail.com Web: https://kilbaha.com.au
--	---

SCHOOL ORDER NUMBER (required) _____ **DATE** _____

NAME _____

SCHOOL _____

ADDRESS _____

POSTCODE _____ **TEL** _____

EMAIL _____

Supplied in WORD format for easy editing and PDF format for easy printing.

Please mark (X) those required.

Detailed answers to VCAA VCE Exams Current Study Design 2016 – 2022	Cost		Detailed answers to VCAA VCE Exams Current Study Design 2016 – 2022	Cost
<input type="checkbox"/> 2020 VCAA VCE Maths Methods Exam 1	\$20	<input type="checkbox"/>	<input type="checkbox"/> 2020 VCAA VCE Specialist Maths Exam 1	\$20
<input type="checkbox"/> 2020 VCAA VCE Maths Methods Exam 2	\$20	<input type="checkbox"/>	<input type="checkbox"/> 2020 VCAA VCE Specialist Maths Exam 2	\$20
<input type="checkbox"/> 2019 VCAA VCE Maths Methods Exam 1	\$20	<input type="checkbox"/>	<input type="checkbox"/> 2019 VCAA VCE Specialist Maths Exam 1	\$20
<input type="checkbox"/> 2019 VCAA VCE Maths Methods Exam 2	\$20	<input type="checkbox"/>	<input type="checkbox"/> 2019 VCAA VCE Specialist Maths Exam 2	\$20
<input type="checkbox"/> 2018 VCAA VCE Maths Methods Exam 1	\$20	<input type="checkbox"/>	<input type="checkbox"/> 2018 VCAA VCE Specialist Maths Exam 1	\$20
<input type="checkbox"/> 2018 VCAA VCE Maths Methods Exam 2	\$20	<input type="checkbox"/>	<input type="checkbox"/> 2018 VCAA VCE Specialist Maths Exam 2	\$20
<input type="checkbox"/> 2017 VCAA VCE Maths Methods Exam 1	\$20	<input type="checkbox"/>	<input type="checkbox"/> 2017 VCAA VCE Specialist Maths Exam 1	\$20
<input type="checkbox"/> 2017 VCAA VCE Maths Methods Exam 2	\$20	<input type="checkbox"/>	<input type="checkbox"/> 2017 VCAA VCE Specialist Maths Exam 2	\$20
<input type="checkbox"/> 2016 VCAA VCE Maths Methods Exam 1	\$20	<input type="checkbox"/>	<input type="checkbox"/> 2016 VCAA VCE Specialist Maths Exam 1	\$20
<input type="checkbox"/> 2016 VCAA VCE Maths Methods Exam 2	\$20	<input type="checkbox"/>	<input type="checkbox"/> 2016 VCAA VCE Specialist Maths Exam 2	\$20

Detailed answers to VCAA VCE Exams on a Northern Hemisphere Timetable (NHT)	Cost		Detailed answers to VCAA VCE Exams on a Northern Hemisphere Timetable (NHT)	Cost
<input type="checkbox"/> 2017 VCAA VCE Maths Methods Exam 1	\$20	<input type="checkbox"/>	<input type="checkbox"/> 2018 VCAA VCE Maths Methods Exam 1	\$20
<input type="checkbox"/> 2017 VCAA VCE Maths Methods Exam 2	\$20	<input type="checkbox"/>	<input type="checkbox"/> 2018 VCAA VCE Maths Methods Exam 2	\$20
<input type="checkbox"/> 2017 VCAA VCE Specialist Maths Exam 1	\$20	<input type="checkbox"/>	<input type="checkbox"/> 2018 VCAA VCE Specialist Maths Exam 1	\$20
<input type="checkbox"/> 2017 VCAA VCE Specialist Maths Exam 2	\$20	<input type="checkbox"/>	<input type="checkbox"/> 2018 VCAA VCE Specialist Maths Exam 2	\$20

Detailed answers to VCAA VCE Exams on a Northern Hemisphere Timetable (NHT)	Cost		Detailed answers to VCAA VCE Examinations. (Old Study Design 2006 – 2015)	Cost
<input type="checkbox"/> 2019 VCAA VCE Maths Methods Exam 1	\$20	<input type="checkbox"/>	<input type="checkbox"/> 2006 - 2014 VCAA VCE Further Maths Exams 1 (9 exams)	\$20
<input type="checkbox"/> 2019 VCAA VCE Maths Methods Exam 2	\$20	<input type="checkbox"/>	<input type="checkbox"/> 2006 - 2014 VCAA VCE Further Maths Exams 2 (9 exams)	\$20
<input type="checkbox"/> 2019 VCAA VCE Specialist Maths Exam 1	\$20	<input type="checkbox"/>	<input type="checkbox"/> 2006 - 2014 VCAA VCE Maths Methods Exams 1 (9 exams)	\$20
<input type="checkbox"/> 2019 VCAA VCE Specialist Maths Exam 2	\$20	<input type="checkbox"/>	<input type="checkbox"/> 2006 - 2014 VCAA VCE Maths Methods Exams 2 (9 exams)	\$20
			<input type="checkbox"/> 2006-2014 VCAA VCE Specialist Maths Exams 1 (9 exams)	\$20
			<input type="checkbox"/> 2006-2014 VCAA VCE Specialist Maths Exams 2 (9 exams)	\$20

Detailed answers to VCAA VCE Exams on a Northern Hemisphere Timetable (NHT)	Cost
<input type="checkbox"/> 2021 VCAA VCE Mathematical Methods Examination 1 on a Northern Hemisphere Timetable (NHT)	\$20
<input type="checkbox"/> 2021 VCAA VCE Mathematical Methods Examination 2 on a Northern Hemisphere Timetable (NHT)	\$20
<input type="checkbox"/> 2021 VCAA VCE Specialist Mathematics Examination 1 on a Northern Hemisphere Timetable (NHT)	\$20
<input type="checkbox"/> 2021 VCAA VCE Specialist Mathematics Examination 2 on a Northern Hemisphere Timetable (NHT)	\$20

Total Amount = \$ _____ (All prices include GST)

Buy and download immediately at <https://kilbaha.com.au>

Email to:
kilbaha@gmail.com

Detailed answers 2019 and 2020 VCAA VCE Mathematics Exams

Kilbaha Education (Est. 1978) (ABN 47 065 111 373) PO Box 2227 Kew Vic 3101 Australia	Tel: (03) 9018 5376 Email: kilbaha@gmail.com Web: https://kilbaha.com.au
--	---

SCHOOL ORDER NUMBER (required) _____ **DATE** _____

NAME _____

SCHOOL _____

ADDRESS _____

POSTCODE _____ **TEL** _____

EMAIL _____

Please mark (X) those required.

Detailed answers to the 2019 and 2020 VCAA VCE Mathematics Exams <i>These are Digital Publications supplied in both PDF and WORD formats with a school site licence to reproduce for students in both print and electronic formats.</i>		Price
	Detailed answers to the 2020 VCAA VCE Mathematical Methods Exam 1	\$20
	Detailed answers to the 2020 VCAA VCE Mathematical Methods Exam 2	\$20
	Detailed answers to the 2020 VCAA VCE Specialist Mathematics Exam 1	\$20
	Detailed answers to the 2020 VCAA VCE Specialist Mathematics Exam 2	\$20
	Detailed answers to the 2019 VCAA VCE Mathematical Methods Exam 1	\$20
	Detailed answers to the 2019 VCAA VCE Mathematical Methods Exam 2	\$20
	Detailed answers to the 2019 VCAA VCE Specialist Mathematics Exam 1	\$20
	Detailed answers to the 2019 VCAA VCE Specialist Mathematics Exam 2	\$20

Total Amount = \$ _____ **(All prices include GST)**

Email to kilbaha@gmail.com

2006 - 2015 Kilbaha VCE Mathematics Trial Examinations

(Old Study Design 2006 – 2015. Great resource bank of questions and answers)

Kilbaha Education (Est. 1978) (ABN 47 065 111 373) PO Box 2227 Kew Vic 3101 Australia	Tel: (03) 9018 5376 Email: kilbaha@gmail.com Web: https://kilbaha.com.au
--	---

SCHOOL ORDER NUMBER (required) _____ **DATE** _____

NAME _____

SCHOOL _____

ADDRESS _____

POSTCODE _____ **TEL** _____

EMAIL _____

Please mark (X) those required.

	Kilbaha VCE Mathematics Trial Examinations with detailed answers. (Old Study Design 2006 – 2015 but great value sets of questions for class use) Supplied in WORD format for easy editing and PDF format for easy printing.	Cost
	2006 - 2015 VCE Further Mathematics Trial Exams 1 (10 examinations)	\$85
	2006 - 2015 VCE Further Mathematics Trial Exams 2 (10 examinations)	\$85
	2006 - 2015 VCE Mathematical Methods Trial Exams 1 (10 examinations)	\$85
	2006 - 2015 VCE Mathematical Methods Trial Exams 2 (10 examinations)	\$85
	2006 - 2015 VCE Specialist Mathematics Trial Exams 1 (10 examinations)	\$85
	2006 - 2015 VCE Specialist Mathematics Trial Exams 2 (10 examinations)	\$85

<input checked="" type="checkbox"/>	Kilbaha detailed answers to VCAA VCE Examinations. (Old Study Design 2006 – 2015 but great value detailed answers for class use) Supplied in WORD format for easy editing and PDF format for easy printing.	Cost
	Detailed answers to the 2006 - 2014 VCAA VCE Further Mathematics Exams 1 (9 examinations)	\$20
	Detailed answers to the 2006 - 2014 VCAA VCE Further Mathematics Exams 2 (9 examinations)	\$20
	Detailed answers to the 2006 - 2014 VCAA VCE Mathematical Methods Exams 1 (9 examinations)	\$20
	Detailed answers to the 2006 - 2014 VCAA VCE Mathematical Methods Exams 2 (9 examinations)	\$20
	Detailed answers to the 2006 - 2014 VCAA VCE Specialist Mathematics Exams 1 (9 examinations)	\$20
	Detailed answers to the 2006 - 2014 VCAA VCE Specialist Mathematics Exams 2 (9 examinations)	\$20

Total Amount = \$ _____ (All prices include GST)

Email to kilbaha@gmail.com

Detailed answers to the VCAA VCE Sample Maths Exams 2016 - 2022

Supplied in Microsoft WORD for easy editing and Adobe PDF for easy printing.

Kilbaha Education (Est. 1978) (ABN 47 065 111 373) PO Box 2227 Kew Vic 3101 Australia	Tel: (03) 9018 5376 Email: kilbaha@gmail.com Web: https://kilbaha.com.au
--	---

SCHOOL ORDER NUMBER (required) _____ **DATE** _____

NAME _____

SCHOOL _____

ADDRESS _____

POSTCODE _____ **TEL** _____

EMAIL _____

Please mark (X) those required.

	Detailed answers to the VCAA VCE Sample Maths Exams for the Study Design 2016 – 2022 WORD and PDF formats supplied	Download the exams at these links	Price
	2016 - 2022 VCAA VCE Further Mathematics Sample Exam 1	http://bit.ly/29uu15R	\$20
	2016 - 2022 VCAA VCE Further Mathematics Sample Exam 2		\$20
	2016 - 2022 VCAA VCE Mathematical Methods Sample Exam 1	http://bit.ly/29vPPAj	\$20
	2016 - 2022 VCAA VCE Mathematical Methods Sample Exam 2		\$20
	2016 - 2022 VCAA VCE Specialist Mathematics Sample Exam 1	http://bit.ly/29xGwiA	\$20
	2016 - 2022 VCAA VCE Specialist Mathematics Sample Exam 2		\$20

Total Amount = \$ _____ **(All prices include GST)**

Email to kilbaha@gmail.com

Detailed Answers to VCAA VCE Specialist Mathematics Examinations 2006 - 2014

Kilbaha Education (Est. 1978) (ABN 47 065 111 373) PO Box 2227 Kew Vic 3101 Australia	Tel: (03) 9018 5376 Email: kilbaha@gmail.com Web: https://kilbaha.com.au
--	---

SCHOOL ORDER NUMBER (required) _____ **DATE** _____

NAME _____

SCHOOL _____

ADDRESS _____

POSTCODE _____ **TEL** _____

EMAIL _____

Please mark (X) those required.

Please ✓ those required. Supplied in WORD format for easy editing and PDF format for easy printing.

✓	Detailed answers to VCAA VCE Examinations. (Old Study Design 2006 – 2015)	Cost
	2006 VCAA VCE Specialist Mathematics Exams 1 and 2	\$20
	2007 VCAA VCE Specialist Mathematics Exams 1 and 2	\$20
	2008 VCAA VCE Specialist Mathematics Exams 1 and 2	\$20
	2009 VCAA VCE Specialist Mathematics Exams 1 and 2	\$20
	2010 VCAA VCE Specialist Mathematics Exams 1 and 2	\$20
	2011 VCAA VCE Specialist Mathematics Exams 1 and 2	\$20
	2012 VCAA VCE Specialist Mathematics Exams 1 and 2	\$20
	2013 VCAA VCE Specialist Mathematics Exams 1 and 2	\$20
	2014 VCAA VCE Specialist Mathematics Exams 1 and 2	\$20

Total Amount = \$ _____ **(All prices include GST)**

Email to kilbaha@gmail.com

FURTHER MATHEMATICS MULTIPLE-CHOICE TESTS

Kilbaha Education (Est. 1978) (ABN 47 065 111 373) PO Box 2227 Kew Vic 3101 Australia	Tel: (03) 9018 5376 Email: kilbaha@gmail.com Web: https://kilbaha.com.au
--	---

SCHOOL ORDER NUMBER (required) _____ **DATE** _____

NAME _____

SCHOOL _____

ADDRESS _____

POSTCODE _____ **TEL** _____

EMAIL _____

Further Mathematics Multiple-Choice Tests with answers for Year12 Students
These are great resources for teachers.
There are twenty-five (25) questions in each test with 5 alternatives for each question. Answers provided.

Each test covers the topics:

- Probability and Statistics
- Arithmetic and Applications
- Probability and Statistics
- Geometry and Trigonometry
- Graphs and Relations
- Business Related Mathematics
- Networks and Decision Mathematics

Please mark (X) those required.

	Further Mathematics Multiple-Choice Tests	Cost		Further Mathematics Multiple-Choice Tests	Cost
	Test 1	\$5		Test 5	\$5
	Test 2	\$5		Test 6	\$5
	Test 3	\$5		Test 7	\$5
	Test 4	\$5			

Total Amount = \$ _____ **(All prices include GST)**

Email to kilbaha@gmail.com

MATHEMATICAL METHODS MULTIPLE-CHOICE TESTS

Kilbaha Education (Est. 1978) (ABN 47 065 111 373) PO Box 2227 Kew Vic 3101 Australia	Tel: (03) 9018 5376 Email: kilbaha@gmail.com Web: https://kilbaha.com.au
--	---

SCHOOL ORDER NUMBER (required) _____ **DATE** _____

NAME _____

SCHOOL _____

ADDRESS _____

POSTCODE _____ **TEL** _____

EMAIL _____

Mathematical Methods Multiple-Choice Tests with answers for Year12 Students.
These are great resources for teachers.
There are twenty-five (25) questions in each test with 5 alternatives for each question. Answers provided.

Each test covers the topics:

- Co-ordinate Geometry
- Trigonometric Functions
- Calculus
- Algebra
- Statistics
- Probability

Please mark (X) those required.

	Mathematical Methods Multiple-Choice Tests	Cost		Mathematical Methods Multiple-Choice Tests	Cost
	Test 1	\$5		Test 5	\$5
	Test 2	\$5		Test 6	\$5
	Test 3	\$5		Test 7	\$5
	Test 4	\$5			

Total Amount = \$ _____ **(All prices include GST)**

Email to kilbaha@gmail.com

SPECIALIST MATHEMATICS MULTIPLE-CHOICE TESTS

Kilbaha Education (Est. 1978) (ABN 47 065 111 373) PO Box 2227 Kew Vic 3101 Australia	Tel: (03) 9018 5376 Email: kilbaha@gmail.com Web: https://kilbaha.com.au
--	---

SCHOOL ORDER NUMBER (required) _____ **DATE** _____

NAME _____

SCHOOL _____

ADDRESS _____

POSTCODE _____ **TEL** _____

EMAIL _____

Specialist Mathematics Multiple-Choice Tests with answers for Year12 Students
These are great resources for teachers.
There are twenty-five (25) questions in each test with 5 alternatives for each question. Answers provided.

Each test covers the topics:

- Co-ordinate Geometry
- Trigonometric Functions
- Algebra
- Calculus
- Vectors in two and three dimensions
- Statistics and Probability
- Geometry
- Mechanics
- Logic

Please mark (X) those required.

	Specialist Mathematics Multiple-Choice Tests	Cost		Specialist Mathematics Multiple-Choice Tests	Cost
	Test 1	\$5		Test 5	\$5
	Test 2	\$5		Test 6	\$5
	Test 3	\$5		Test 7	\$5
	Test 4	\$5			

Total Amount = \$ _____ **(All prices include GST)**

Email to kilbaha@gmail.com

VCAA VCE MATHEMATICS EXAMINATIONS

ONLINE MULTIPLE CHOICE QUESTIONS

ORDER FORM

Kilbaha Education (Est. 1978) (ABN 47 065 111 373) PO Box 2227 Kew Vic 3101 Australia	Tel: (03) 9018 5376 Email: kilbaha@gmail.com Web: https://kilbaha.com.au
--	---

SCHOOL ORDER NUMBER (required) _____ **DATE** _____

NAME _____

SCHOOL _____

ADDRESS _____

POSTCODE _____ **TEL** _____

EMAIL _____

- **VCAA VCE Examinations – Current study guide (2016-20220 - Multiple Choice Questions**
- **Original VCAA Exams with VCAA format**
- Do online on any computer
- Automatic marking with percentage score
- Summary of student correct and incorrect answers for teacher analysis
- School site licence to reproduce for all students in your school

Please mark (X) those required.

	2019 VCAA VCE Further Mathematics Exam 1 – 56 Multiple Choice Questions	\$20
	2019 VCAA VCE Mathematical Methods Exam 2 – 20 Multiple Choice Questions	\$20
	2019 VCAA VCE Specialist Mathematics Exam 2 – 20 Multiple Choice Questions	\$20

Total Amount = \$ _____ **(All prices include GST)**

Email to kilbaha@gmail.com

AUSTRALIAN CURRICULUM

99 MULTIPLE CHOICE QUESTIONS

MATHEMATICS

Years 9 and 10

Kilbaha Education (Est. 1978) (ABN 47 065 111 373) PO Box 2227 Kew Vic 3101 Australia	Tel: (03) 9018 5376 Email: kilbaha@gmail.com Web: https://kilbaha.com.au
--	---

SCHOOL ORDER NUMBER (required) _____ **DATE** _____

NAME _____

SCHOOL _____

ADDRESS _____

POSTCODE _____ **TEL** _____

EMAIL _____

Features of these Mathematics Multiple Choice Questions

- Comprehensive coverage of the Australian Curriculum for Mathematics for each level
- 99 multiple choice questions
- Detailed answers and explanations
- Number and Algebra – Questions 1 – 33
- Measurement and Geometry – Questions 34 – 66
- Statistics and Probability – Questions 67 - 99
- Supplied in Word format for easy editing so that you can create your own tests
- Supplied in pdf format for easy printing so that you can produce tests quickly
- Each question is precisely mapped to a concept in the Australian Curriculum
- Web links are provided with each answer so that teachers and students can do research on each topic
- Unlimited and on-going school site licence for the printing and / or electronic use of all questions and answers

Please mark (X) those required.

	99 Multiple Choice Questions with detailed answers, web links and Australian Curriculum references	Price		99 Multiple Choice Questions with detailed answers, web links and Australian Curriculum references	Price
	Year 9 Mathematics Download sample questions http://bit.ly/2y5Pwr9	\$49.95		Year 10 Mathematics Download sample questions http://bit.ly/2kuN8pa	\$49.95

Total Amount = \$ _____ **(All prices include GST)**

Email to kilbaha@gmail.com

Mathematics Multiple Choice Questions Years 10, 11, 12

Kilbaha Education (Est. 1978) (ABN 47 065 111 373) PO Box 2227 Kew Vic 3101 Australia	Tel: (03) 9018 5376 Email: kilbaha@gmail.com Web: https://kilbaha.com.au
--	---

SCHOOL ORDER NUMBER (required) _____ **DATE** _____

NAME _____

SCHOOL _____

ADDRESS _____

POSTCODE _____ **TEL** _____

EMAIL _____

For each topic, you get

- 20 Multiple Choice Questions with answers
- PDF file for easy printing
- WORD file for easy editing
- Student Answer sheet
- Teacher Answer Sheet
- School Site Licence for electronic use
- School Site Licence for printing and hard copy use

Please mark (X) those required.

Topic	Price	Topic	Price
Number Systems	\$10	Logic	\$10
Financial Arithmetic	\$10	Algebra	\$10
Vectors	\$10	Quadratics	\$10
Trigonometric Applications	\$10	Co-ordinate Geometry – The Straight Line	\$10
Sequences and Series	\$10	Limits and Differentiation	\$10
Matrices	\$10	Calculus	\$10
Sets	\$10	Calculus (Differentiation)	\$10
Combinatorics	\$10	Graphs	\$10
Simple Probability	\$10	Calculus (Integration)	\$10
Arithmetic Sequences and Series	\$10	Exponentials	\$10
Probability Distributions	\$10	Logarithmic Functions	\$10

Total Amount = \$ _____ **(All prices include GST)**

Email to kilbaha@gmail.com

Mathematics Multiple Choice Questions (MCQs) for the Australian Curriculum

Kilbaha Education (Est. 1978) (ABN 47 065 111 373) PO Box 2227 Kew Vic 3101 Australia	Tel: (03) 9018 5376 Email: kilbaha@gmail.com Web: https://kilbaha.com.au
--	---

SCHOOL ORDER NUMBER (required) _____ **DATE** _____

NAME _____

SCHOOL _____

ADDRESS _____

POSTCODE _____ **TEL** _____

EMAIL _____

You will receive: (Units 1 and 2 are Year 11; Units 3 and 4 are Year 12)

- (1) **PDF** file with answers for easy printing.
- (2) **WORD** file with all multiple-choice questions (MCQs) mapped to the Australian Curriculum for easy editing.
- (3) Summary of the Australian Curriculum References for all questions so you can construct your own tests.
- (4) School site licence to reproduce questions for all teachers and students in printed and electronic formats.

Please mark (X) those required.

	Australian Curriculum Subject	Year Level	Number of MCQs	Price
1	Essential Mathematics	Unit 1	50	\$30
2	Essential Mathematics	Unit 2	50	\$30
3	Essential Mathematics	Unit 3	50	\$30
4	Essential Mathematics	Unit 4	50	\$30
5	General Mathematics	Unit 1	50	\$30
6	General Mathematics	Unit 2	50	\$30
7	Mathematical Methods	Unit 1	50	\$30
8	Mathematical Methods	Unit 2	50	\$30
9	Mathematical Methods	Unit 3	50	\$30
10	Mathematical Methods	Unit 4	50	\$30
11	Specialist Mathematics	Unit 1	50	\$30
12	Specialist Mathematics	Unit 2	50	\$30
13	Specialist Mathematics	Unit 3	50	\$30
14	Specialist Mathematics	Unit 4	50	\$30

Total Amount = \$ _____ **(All prices include GST)**

Email to kilbaha@gmail.com

AUSTRALIAN CURRICULUM
200 Multiple Choice Questions

Essential Mathematics

Units 1, 2, 3, 4

Kilbaha Education (Est. 1978) (ABN 47 065 111 373) PO Box 2227 Kew Vic 3101 Australia	Tel: (03) 9018 5376 Email: kilbaha@gmail.com Web: https://kilbaha.com.au
--	---

SCHOOL ORDER NUMBER (required) _____ **DATE** _____

NAME _____

SCHOOL _____

ADDRESS _____

POSTCODE _____ **TEL** _____

EMAIL _____

Features of these Australian Curriculum Multiple Choice Questions

- Comprehensive coverage of the Australian Curriculum for Essential Mathematics for each unit
- Units 1, 2, 3, 4.
- 50 multiple choice questions with answers for each unit.
- Written by experienced, practising teachers.
- Supplied in WORD format for easy editing so that you can create your own tests.
- Supplied in PDF format for easy printing so that you can produce tests quickly.
- Each question is precisely mapped to a concept in the Australian Curriculum.
- Unlimited and on-going school site licence for the printing and / or electronic use of all questions.

Please mark (X) those required.

Australian Curriculum 50 Multiple Choice Questions for each unit		Price	Australian Curriculum 50 Multiple Choice Questions for each unit		Price
<input type="checkbox"/>	Unit 1 Essential Mathematics	\$30	<input type="checkbox"/>	Unit 2 Essential Mathematics	\$30
<input type="checkbox"/>	Unit 3 Essential Mathematics	\$30	<input type="checkbox"/>	Unit 4 Essential Mathematics	\$30

Total Amount = \$ _____ **(All prices include GST)**

Email to kilbaha@gmail.com

AUSTRALIAN CURRICULUM
100 Multiple Choice Questions
General Mathematics
Units 1 and 2

Kilbaha Education (Est. 1978) (ABN 47 065 111 373) PO Box 2227 Kew Vic 3101 Australia	Tel: (03) 9018 5376 Email: kilbaha@gmail.com Web: https://kilbaha.com.au
--	---

SCHOOL ORDER NUMBER (required) _____ **DATE** _____

NAME _____

SCHOOL _____

ADDRESS _____

POSTCODE _____ **TEL** _____

EMAIL _____

Features of these Australian Curriculum Multiple Choice Questions

- Comprehensive coverage of the Australian Curriculum for General Mathematics for each unit
- Units 1 and 2.
- 50 multiple choice questions with answers for each unit.
- Written by experienced, practising teachers.
- Supplied in WORD format for easy editing so that you can create your own tests.
- Supplied in PDF format for easy printing so that you can produce tests quickly.
- Each question is precisely mapped to a concept in the Australian Curriculum.
- Unlimited and on-going school site licence for the printing and / or electronic use of all questions.

Please mark (X) those required.

Australian Curriculum 50 Multiple Choice Questions for each unit		Price	Australian Curriculum 50 Multiple Choice Questions for each unit		Price
<input type="checkbox"/>	Unit 1 General Mathematics	\$30	<input type="checkbox"/>	Unit 2 General Mathematics	\$30

Total Amount = \$ _____ **(All prices include GST)**

Email to kilbaha@gmail.com

**AUSTRALIAN CURRICULUM
200 Multiple Choice Questions**

Mathematical Methods

Units 1, 2, 3, 4

Kilbaha Education (Est. 1978) (ABN 47 065 111 373) PO Box 2227 Kew Vic 3101 Australia	Tel: (03) 9018 5376 Email: kilbaha@gmail.com Web: https://kilbaha.com.au
--	---

SCHOOL ORDER NUMBER (required) _____ **DATE** _____

NAME _____

SCHOOL _____

ADDRESS _____

POSTCODE _____ **TEL** _____

EMAIL _____

Features of these Australian Curriculum Multiple Choice Questions

- Comprehensive coverage of the Australian Curriculum for Mathematical Methods for each unit
- Units 1, 2, 3, 4.
- 50 multiple choice questions with answers for each unit.
- Written by experienced, practising teachers.
- Supplied in WORD format for easy editing so that you can create your own tests.
- Supplied in PDF format for easy printing so that you can produce tests quickly.
- Each question is precisely mapped to a concept in the Australian Curriculum.
- Unlimited and on-going school site licence for the printing and / or electronic use of all questions.

Please mark (X) those required.

Australian Curriculum 50 Multiple Choice Questions for each unit		Price	Australian Curriculum 50 Multiple Choice Questions for each unit		Price
	Unit 1 Mathematical Methods	\$30		Unit 2 Mathematical Methods	\$30
	Unit 3 Mathematical Methods	\$30		Unit 4 Mathematical Methods	\$30

Total Amount = \$ _____ **(All prices include GST)**

Email to kilbaha@gmail.com

AUSTRALIAN CURRICULUM
200 Multiple Choice Questions
Specialist Mathematics
Units 1, 2, 3, 4

Kilbaha Education (Est. 1978) (ABN 47 065 111 373) PO Box 2227 Kew Vic 3101 Australia	Tel: (03) 9018 5376 Email: kilbaha@gmail.com Web: https://kilbaha.com.au
--	---

SCHOOL ORDER NUMBER (required) _____ **DATE** _____

NAME _____

SCHOOL _____

ADDRESS _____

POSTCODE _____ **TEL** _____

EMAIL _____

Features of these Australian Curriculum Multiple Choice Questions

- Comprehensive coverage of the Australian Curriculum for Specialist Mathematics for each unit
- Units 1, 2, 3, 4.
- 50 multiple choice questions with answers for each unit.
- Written by experienced, practising teachers.
- Supplied in WORD format for easy editing so that you can create your own tests.
- Supplied in PDF format for easy printing so that you can produce tests quickly.
- Each question is precisely mapped to a concept in the Australian Curriculum.
- Unlimited and on-going school site licence for the printing and / or electronic use of all questions.

Please mark (X) those required.

Australian Curriculum 50 Multiple Choice Questions for each unit		Price	Australian Curriculum 50 Multiple Choice Questions for each unit		Price
<input type="checkbox"/>	Unit 1 Specialist Mathematics	\$30	<input type="checkbox"/>	Unit 2 Specialist Mathematics	\$30
<input type="checkbox"/>	Unit 3 Specialist Mathematics	\$30	<input type="checkbox"/>	Unit 4 Specialist Mathematics	\$30

Total Amount = \$ _____ **(All prices include GST)**

Email to kilbaha@gmail.com

AUSTRALIAN CURRICULUM Comprehensive Tests and Mark Books MATHEMATICS Years 5, 6, 7, 8, 9, 10, 10A

Kilbaha Education (Est. 1978) (ABN 47 065 111 373) PO Box 2227 Kew Vic 3101 Australia	Tel: (03) 9018 5376 Email: kilbaha@gmail.com Web: https://kilbaha.com.au
--	---

SCHOOL ORDER NUMBER (required) _____ **DATE** _____

NAME _____

SCHOOL _____

ADDRESS _____

POSTCODE _____ **TEL** _____

EMAIL _____

Features of each of these Australian Curriculum Mathematics Tests and Mathematics Mark Books

- Comprehensive coverage of the Australian Curriculum for Mathematics for each level
- Years 5, 6, 7, 8, 9, 10, 10A.
- 30 multiple choice questions with detailed answers ($30 \times 1 = 30$ marks.)
- 40 short answer questions with detailed answers ($20 \times 1 = 20$ marks), ($10 \times 2 = 20$ marks), ($10 \times 3 = 30$ marks).
- Supplied in WORD format for easy editing so that you can create your own tests.
- Also supplied in PDF format for easy printing so that you can produce tests quickly.
- Each question is precisely mapped to a concept in the Australian Curriculum.
- Detailed answers to every question.
- Web links with every answer so that you can do research on each curriculum topic.
- Mark Books are supplied in EXCEL, WORD and PDF formats so that you can record your students' progress.
- Unlimited and on-going school site licence for the printing and / or electronic use of all Tests and Mark Books
- *Do you need these tests today? Buy online and download immediately.*
- Buy online here <https://kilbaha.com.au/Australian-Curriculum-Tests/Australian-Curriculum-Mathematics>

Please mark (X) those required.

	Australian Curriculum Tests	Price
	Year 5 Mathematics (165 pages)	\$30
	Year 5 Mark Book	\$10
	Year 7 Mathematics (165 pages)	\$30
	Year 7 Mark Book	\$10
	Year 9 Mathematics (165 pages)	\$30
	Year 9 Mark Book	\$10
	Year 10A Mathematics (166 pages)	\$30
	Year 10A Mark Book	\$10

	Australian Curriculum Tests	Price
	Year 6 Mathematics (166 pages)	\$30
	Year 6 Mark Book	\$10
	Year 8 Mathematics (165 pages)	\$30
	Year 8 Mark Book	\$10
	Year 10 Mathematics (164 pages)	\$30
	Year 10 Mark Book	\$10

Total Amount = \$ _____ **(All prices include GST)**

Email to kilbaha@gmail.com

Year 7 Mathematics

Assignments, Topic Tests, Comprehensive Tests

Kilbaha Education (Est. 1978) (ABN 47 065 111 373) PO Box 2227 Kew Vic 3101 Australia	Tel: (03) 9018 5376 Email: kilbaha@gmail.com Web: https://kilbaha.com.au
--	---

SCHOOL ORDER NUMBER (required) _____ **DATE** _____

NAME _____

SCHOOL _____

ADDRESS _____

POSTCODE _____ **TEL** _____

EMAIL _____

- Multiple-choice and extended answer questions.
- WORD files for easy editing.
- PDF files for easy printing.
- Detailed answers included.
- Cost is \$5 per Assignment, Topic Test or Comprehensive Test.

Please mark (X) those required.

Assignment	Topic Test	Comprehensive Test
1. whole numbers, fractions, decimals, percentages	1. ratio	1. whole numbers, working with angles, time, speed, mass, algebra rules, interpreting graphs
2. factors, multiples, primes	2. fractions	2. fractions, 2D and 3D shapes, measuring length, simplifying expressions, interpreting tables
3. working with angles, properties of angles, triangles, quadrilaterals	3. working with angles	3. decimals, constructions, area, substitution, drawing graphs
4. 2D and 3D shapes, constructions	4. 2D and 3D shapes	4. factors, multiples, primes, percentages, properties of angles, triangles, quadrilaterals, volume, equations, Cartesian co-ordinates
5. time, speed, mass	5. time, speed, mass	5. miscellaneous
6. volume, area, length	6. perimeter and area	Number of Assignments, Topic Tests and Comprehensive Tests @ \$5 each = _____ Cost = \$ _____
7. algebra rules, simplifying expressions	7. simplification and substitution	
8. equations, substitution	8. equations	
9. interpreting tables, graphs, drawing graphs	9. interpreting graphs	
10. Cartesian co-ordinates	10. interpreting tables and drawing graphs	

Total Amount = \$ _____ (All prices include GST)

Email to kilbaha@gmail.com

Year 7, 8, 9, 10 Mathematics Examinations with detailed answers (1.0 - 1.5 hours each)

Kilbaha Education (Est. 1978) (ABN 47 065 111 373) PO Box 2227 Kew Vic 3101 Australia	Tel: (03) 9018 5376 Email: kilbaha@gmail.com Web: https://kilbaha.com.au
--	---

SCHOOL ORDER NUMBER (required) _____ **DATE** _____

NAME _____

SCHOOL _____

ADDRESS _____

POSTCODE _____ **TEL** _____

EMAIL _____

- Multiple-choice and extended answer questions.
- WORD files for easy editing.
- PDF files for easy printing.
- Detailed answers included.
- Examinations are 1.0 - 1.5 hours.
- All examinations based on the Australian Curriculum.
- **Save yourself heaps of time setting examinations.**
- Cost is \$10 per Examination for class use.

Please mark (X) those required.

Year Level and Examination	Year Level and Examination
Year 7 Exam 1	Year 9 Exam 1
Year 7 Exam 2	Year 9 Exam 2
Year 7 Exam 3	Year 9 Exam 3
Year 8 Exam 1	Year 10 Exam 1
Year 8 Exam 2	Year 10 Exam 2
Year 8 Exam 3	Year 10 Exam 3

Number of Examinations @ \$10 each = _____

Total Amount = \$ _____ **(All prices include GST)**

Email to kilbaha@gmail.com

All Kilbaha NAPLAN Trial Tests 2009 – 2019 (11 years) Mathematics

Paper based tests.

Unlimited school site licence to reproduce for all teachers and students

Kilbaha Education (Est. 1978) (ABN 47 065 111 373) PO Box 2227 Kew Vic 3101 Australia	Tel: (03) 9018 5376 Email: kilbaha@gmail.com Web: https://kilbaha.com.au
--	---

SCHOOL ORDER NUMBER (required) _____ **DATE** _____

NAME _____

SCHOOL _____

ADDRESS _____

POSTCODE _____ **TEL** _____

EMAIL _____

Please mark (X) those required.

All Kilbaha Mathematics NAPLAN Trial Tests 2009 – 2019 (11 years) with detailed answers and responses <i>School site licence for all teachers and students for printing and sharing on all electronic devices.</i>		Package Price
Year 3 – 11 sets of original test questions with detailed answers and responses. Numeracy. <i>Normal cost = $\\$20 \times 11 = \\220</i>		\$99.95
Year 5 – 11 sets of original test questions with detailed answers and responses. Numeracy. <i>Normal cost = $\\$20 \times 11 = \\220</i>		\$99.95
Year 7 – 19 sets of original test questions with detailed answers and responses. Numeracy Calculator and Non-Calculator. <i>Normal cost = $\\$20 \times 19 = \\380</i>		\$99.95
Year 9 – 19 sets of original test questions with detailed answers and responses. Numeracy Calculator and Non-Calculator. <i>Normal cost = $\\$20 \times 19 = \\380</i>		\$99.95

Total Amount = \$ _____ **(All prices include GST)**

Email to kilbaha@gmail.com

Buy and download immediately at <https://kilbaha.com.au>

NAPLAN Trial Tests

Numeracy – Hard Copy

Supplied in Microsoft WORD for easy editing and Adobe PDF for easy printing.
Includes school site licence for distribution to students.

Kilbaha Education (Est. 1978) (ABN 47 065 111 373) PO Box 2227 Kew Vic 3101 Australia	Tel: (03) 9018 5376 Email: kilbaha@gmail.com Web: https://kilbaha.com.au
--	---

SCHOOL ORDER NUMBER (required) _____ **DATE** _____

NAME _____

SCHOOL _____

ADDRESS _____

POSTCODE _____ **TEL** _____

EMAIL _____

Please mark (X) those required.

Kilbaha NAPLAN Numeracy. Trial Tests with detailed answers. These tests are for hard copy use.		Price	Kilbaha NAPLAN Numeracy. Trial Tests with detailed answers. These tests are for hard copy use.		Price
	2019 Year 3 Numeracy	\$20		2019 Year 5 Numeracy	\$20
	2018 Year 3 Numeracy	\$20		2018 Year 5 Numeracy	\$20
	2017 Year 3 Numeracy	\$20		2017 Year 5 Numeracy	\$20
	2016 Year 3 Numeracy	\$20		2016 Year 5 Numeracy	\$20
	2015 Year 3 Numeracy	\$20		2015 Year 5 Numeracy	\$20
	2014 Year 3 Numeracy	\$20		2014 Year 5 Numeracy	\$20
	2013 Year 3 Numeracy	\$20		2013 Year 5 Numeracy	\$20
	2012 Year 3 Numeracy	\$20		2012 Year 5 Numeracy	\$20
	2011 Year 3 Numeracy	\$20		2011 Year 5 Numeracy	\$20
	2010 Year 3 Numeracy	\$20		2010 Year 5 Numeracy	\$20
	2009 Year 3 Numeracy	\$20		2009 Year 5 Numeracy	\$20
	2019 Year 7 Numeracy Non-Calculator + Calculator	\$20		2019 Year 9 Numeracy Non-Calculator + Calculator	\$20
	2018 Year 7 Numeracy Non-Calculator + Calculator	\$20		2018 Year 9 Numeracy Non-Calculator + Calculator	\$20
	2017 Year 7 Numeracy Non-Calculator + Calculator	\$20		2017 Year 9 Numeracy Non-Calculator + Calculator	\$20
	2016 Year 7 Numeracy Non-Calculator + Calculator	\$20		2016 Year 9 Numeracy Non-Calculator + Calculator	\$20
	2015 Year 7 Numeracy Non-Calculator + Calculator	\$20		2015 Year 9 Numeracy Non-Calculator + Calculator	\$20
	2014 Year 7 Numeracy Non-Calculator + Calculator	\$20		2014 Year 9 Numeracy Non-Calculator + Calculator	\$20
	2013 Year 7 Numeracy Non-Calculator + Calculator	\$20		2013 Year 9 Numeracy Non-Calculator + Calculator	\$20
	2012 Year 7 Numeracy Non-Calculator + Calculator	\$20		2012 Year 9 Numeracy Non-Calculator + Calculator	\$20
	2011 Year 7 Numeracy Non-Calculator + Calculator	\$20		2011 Year 9 Numeracy Non-Calculator + Calculator	\$20
	2010 Year 7 Numeracy Non-Calculator + Calculator	\$20		2010 Year 9 Numeracy Non-Calculator + Calculator	\$20
	2009 Year 7 Numeracy Non-Calculator + Calculator	\$20		2009 Year 9 Numeracy Non-Calculator + Calculator	\$20

Total Amount = \$ _____ **(All prices include GST)**

Email to kilbaha@gmail.com

Detailed Answers and Responses to ALL ACARA NAPLAN TESTS 2008 – 2018

Download the Questions at the links below.

<https://www.acara.edu.au/assessment/naplan/naplan-2008-2011-test-papers>

<https://www.acara.edu.au/assessment/naplan/naplan-2012-2016-test-papers>

Unlimited school site licence to reproduce for all teachers and students.

Kilbaha Education (Est. 1978) (ABN 47 065 111 373) PO Box 2227 Kew Vic 3101 Australia	Tel: (03) 9018 5376 Email: kilbaha@gmail.com Web: https://kilbaha.com.au
--	--

SCHOOL ORDER NUMBER (required) _____ DATE _____

NAME _____

SCHOOL _____

ADDRESS _____

POSTCODE _____ TEL _____

EMAIL _____

Please mark (X) those required.

	Detailed answers and responses to ALL ACARA NAPLAN TESTS 2008 – 2018 (Questions not included) <i>Download questions from the links at the top of this page.</i>	Price
	Year 3 – 44 sets of answers – 387 pages. School site licence for all teachers and students for printing and sharing on all electronic devices.	\$99.95
	Year 5 – 44 sets of answers – 454 pages. School site licence for all teachers and students for printing and sharing on all electronic devices.	\$99.95
	Year 7 – 53 sets of answers – 569 pages. School site licence for all teachers and students for printing and sharing on all electronic devices.	\$99.95
	Year 9 – 53 sets of answers – 595 pages. School site licence for all teachers and students for printing and sharing on all electronic devices.	\$99.95

Total Amount = \$ _____ (All prices include GST)

Email to kilbaha@gmail.com

Buy and download immediately at <https://kilbaha.com.au>

2021 Kilbaha NAPLAN Numeracy Trial Tests COMPUTER USE Automatic Marking

School site licence to reproduce for all teachers and students

Electronic files supplied in Interactive Adobe PDF for use on all computers. Questions are marked automatically.

The 2021 Kilbaha NAPLAN Numeracy Trial Tests are supplied with detailed answers.

Kilbaha Education (Est. 1978) (ABN 47 065 111 373) PO Box 2227 Kew Vic 3101 Australia	Tel: +613 9018 5376 Email: kilbaha@gmail.com Web: https://kilbaha.com.au
--	---

SCHOOL ORDER NUMBER (required) _____ **DATE** _____

NAME _____

SCHOOL _____

ADDRESS _____

POSTCODE _____ **TEL** _____

EMAIL _____

Please mark (X) those required.

2021 Kilbaha NAPLAN Numeracy Trial Tests with detailed answers. Electronic files for Computer Use. Marked automatically.		Price	2021 Kilbaha NAPLAN Numeracy Trial Tests with detailed answers. Electronic files for Computer Use. Marked automatically.		Price
Year 3 Numeracy		\$30	Year 5 Numeracy		\$30
Year 7 Numeracy		\$30	Year 9 Numeracy		\$30

Total Amount = \$ _____ **(All prices include GST)**

Email to kilbaha@gmail.com

Interactive Mathematics Challenge

Buy and download immediately at <https://kilbaha.com.au>



50 Number Problems and 50 Word Problems for Primary and Junior Secondary

Kilbaha Education (Est. 1978) ABN 47 065 111 373 PO Box 2227 Kew Vic 3101 Australia	Tel: +613 9018 5376 Email: kilbaha@gmail.com Web: https://kilbaha.com.au
--	--

SCHOOL ORDER NUMBER (required) _____ DATE _____

NAME _____

SCHOOL _____

ADDRESS _____

POSTCODE _____ TEL _____

EMAIL _____

- 50 Interactive Number Problems for Primary and Junior Secondary Students.
- 50 Interactive Word Problems for Primary and Junior Secondary Students.
- Automatic marking for all problems.
- **Challenge your students to get all 50 questions correct on the first attempt!**
- School site licence.
- Great diagnostic tools for your mathematics classes.
- Both titles work on **any computer** using the free Adobe Reader from <https://get.adobe.com/reader/>
- Free answer sheets for both titles supplied for teachers.

Please mark (X) those required.

	Title	Price
	What Number Am I? 50 interactive graded Number Problems for Primary and Junior Secondary Students. Whole numbers, fractions, mixed numbers. More information here. https://kilbaha.com.au/Interactive-Maths-1-What-Number-Am-I	\$30
	Mathematics Word Problems. Multiplication, Addition, Division, Subtraction 50 interactive Word Problems for Primary and Junior Secondary Students – 10 simple multiplication problems, 10 simple division problems, 30 other word problems involving remainders, mixtures of operations, lowest common multiple, logic. More information here. https://kilbaha.com.au/Interactive-Mathematics/Interactive-Maths-2-Word-Problems	\$30

Total Amount = \$ _____ (All prices include GST)

Email to kilbaha@gmail.com

Buy and download immediately at <https://kilbaha.com.au>

Interactive Mathematics Years 9 and 10

Buy and download immediately at <https://kilbaha.com.au>



Number and Algebra Geometry and Measurement Statistics and Probability

Kilbaha Education (Est. 1978) ABN 47 065 111 373 PO Box 2227 Kew Vic 3101 Australia	Tel: +613 9018 5376 Email: kilbaha@gmail.com Web: https://kilbaha.com.au
--	--

SCHOOL ORDER NUMBER (required) _____ DATE _____

NAME _____

SCHOOL _____

ADDRESS _____

POSTCODE _____ TEL _____

EMAIL _____

- Interactive multiple-choice questions on Number and Algebra, Geometry and Measurement, Statistics and Probability for Year 9
- Interactive multiple-choice questions on Number and Algebra, Geometry and Measurement, Statistics and Probability for Year 10
- Detailed answers and explanations for all questions
- Automatic marking for all questions
- Australian Curriculum references for all questions
- School site licence for print and electronic use
- All titles work on **any computer** using the free Adobe Reader from <https://get.adobe.com/reader/>

Please mark (X) those required.

	Title	Price
<input type="checkbox"/>	Year 9 Number and Algebra. 33 interactive questions. Automatic marking. Detailed answers. Curriculum references.	\$30
<input type="checkbox"/>	Year 9 Geometry and Measurement. 33 interactive questions. Automatic marking. Detailed answers. Curriculum references.	\$30
<input type="checkbox"/>	Year 9 Statistics and Probability. 33 interactive questions. Automatic marking. Detailed answers. Curriculum references.	\$30
<input type="checkbox"/>	Year 10 Number and Algebra. 33 interactive questions. Automatic marking. Detailed answers. Curriculum references.	\$30
<input type="checkbox"/>	Year 10 Geometry and Measurement. 33 interactive questions. Automatic marking. Detailed answers. Curriculum references.	\$30
<input type="checkbox"/>	Year 10 Statistics and Probability. 33 interactive questions. Automatic marking. Detailed answers. Curriculum references.	\$30

Total Amount = \$ _____ (All prices include GST)

Email to kilbaha@gmail.com

Buy and download immediately at <https://kilbaha.com.au>

NSW HSC TRIAL EXAM MATHS GENERAL 2

Kilbaha Education (Est. 1978) (ABN 47 065 111 373) PO Box 2227 Kew Vic 3101 Australia	Tel: (03) 9018 5376 Email: kilbaha@gmail.com Web: https://kilbaha.com.au
--	--

SCHOOL ORDER NUMBER (required) _____ DATE _____

NAME _____

SCHOOL _____

ADDRESS _____

POSTCODE _____ TEL _____

EMAIL _____

Please supply the following.

X	HSC Trial Examination Mathematics General 2 with detailed answers from Kilbaha Education. <ul style="list-style-type: none">• Question paper and detailed answers are provided in WORD format for easy editing and PDF format for easy printing.• This is a Trial Exam based on the 2015 syllabus.• This Trial Exam may be reproduced in electronic and hard copy for use within the School which purchases it.• Price \$20
---	---

Total Amount = \$20 (Includes GST)

Email to kilbaha@gmail.com

Buy and download immediately at <https://kilbaha.com.au>

Fantastic mathematics for the postponed Olympic Year!
Olympic Games Tokyo Japan.

Olympics Mathematics

Kilbaha Education (Est. 1978) PO Box 2227 Kew Vic 3101 Australia	ABN 47 065 111 373	Tel: (03) 9018 5376 Email: kilbaha@gmail.com Web: https://kilbaha.com.au
---	--------------------	--

SCHOOL ORDER NUMBER (required) _____ DATE _____

NAME _____

SCHOOL _____

ADDRESS _____

POSTCODE _____ TEL _____

EMAIL _____

- Mathematics project workbooks – exciting mathematics for the classroom
- Use the PDF file as mathematics work for one week based on the Olympics
- Use the WORD file to modify the workbooks for your classes
- Classroom trials show that students love doing these projects
- Each workbook provides a maths activity lasting one week (including homework)
- Teaching notes and answers included
- Print as many copies as you need. School site licence.
- Proven workbooks that students really enjoy using while learning heaps of great mathematics
- All workbooks supplied in both WORD format for easy editing and PDF format for easy printing
- School site licence is included.
- Print hard copies or modify the files for suit your class.
- Add to your school Intranet or put on all devices in your classroom.

Please mark (X) those required.

	In the Running for the Olympics (58 pages) (Recommended for Classes 5 – 8)	\$30
	In Training for the Olympics (57 pages) (Recommended for Classes 6 – 9)	\$30
	In Search of the Holy Grail (Based on a Medieval Theme) (32 pages) (Recommended for Classes 7 – 10)	\$30

Total Amount = \$ _____ (All prices include GST)

Email to kilbaha@gmail.com

Buy and download immediately at <https://kilbaha.com.au>

Flying with Fractions

Everything about fractions for Primary Schools and High Schools

Kilbaha Education (Est. 1978) (ABN 47 065 111 373) PO Box 2227 Kew Vic 3101 Australia	Tel: (03) 9018 5376 Email: kilbaha@gmail.com Web: https://kilbaha.com.au
--	---

SCHOOL ORDER NUMBER (required) _____ **DATE** _____

NAME _____

SCHOOL _____

ADDRESS _____

POSTCODE _____ **TEL** _____

EMAIL _____

For each topic, you get

- Pre-test
- Many instructional movies
- Extensive interactive exercises
- Post-test
- School Site Licence for electronic use
- School Site Licence for printing and hard copy use

Works on any computer with the free Adobe Reader. <https://get.adobe.com/reader/>

Please mark (X) those required.

Fractions 1		Price	Fractions 2		Price
	What is a fraction?	\$20		Equivalent fractions	\$20
	Parts of a fraction	\$20		Highest common factor	\$20
	Fractions and the number line	\$20		Counting in fractions	\$20
	Mixed numbers	\$20		Lowest common denominator	\$20
	Improper fractions	\$20		Addition of fractions	\$20
Fractions 3		Price	Fractions 4		Price
	Subtraction of fractions	\$20		Algebraic fractions – lowest common multiple	\$20
	Multiplication of fractions	\$20		Addition of algebraic fractions	\$20
	Division of fractions	\$20		Subtraction of algebraic fractions	\$20
	Word problems	\$20		Multiplication of algebraic fractions	\$20
	Algebraic fractions - introduction	\$20		Division of algebraic fractions	\$20

Total Amount = \$ _____ **(All prices include GST)**

Email to kilbaha@gmail.com

Flying with Decimals

Everything about decimals for Primary Schools and High Schools

Kilbaha Education (Est. 1978) (ABN 47 065 111 373) PO Box 2227 Kew Vic 3101 Australia	Tel: (03) 9018 5376 Email: kilbaha@gmail.com Web: https://kilbaha.com.au
--	---

SCHOOL ORDER NUMBER (required) _____ **DATE** _____

NAME _____

SCHOOL _____

ADDRESS _____

POSTCODE _____ **TEL** _____

EMAIL _____

For each topic, you get

- Pre-test
- Many instructional movies
- Extensive interactive exercises
- Post-test
- School Site Licence for electronic use
- School Site Licence for printing and hard copy use

Works on any computer with the free Adobe Reader. <https://get.adobe.com/reader/>

Please mark (X) those required.

Decimals 1		Price	Decimals 2		Price
<input type="checkbox"/>	Tenths	\$20	<input type="checkbox"/>	Working with decimal places	\$20
<input type="checkbox"/>	Hundredths	\$20	<input type="checkbox"/>	Ordering decimals	\$20
<input type="checkbox"/>	Place value	\$20	<input type="checkbox"/>	Looking for patterns	\$20
<input type="checkbox"/>	Fractions as decimals	\$20	<input type="checkbox"/>	Addition of decimals	\$20
Decimals 3		Price	Decimals 4		Price
<input type="checkbox"/>	Subtraction of decimals	\$20	<input type="checkbox"/>	Order of operations	\$20
<input type="checkbox"/>	Multiplication of decimals	\$20	<input type="checkbox"/>	Percentage	\$20
<input type="checkbox"/>	Multiplication Bingo Games	\$20	<input type="checkbox"/>	Word Problems	\$20
<input type="checkbox"/>	Division of decimals	\$20	<input type="checkbox"/>	Assessment	\$20

Total Amount = \$ _____ **(All prices include GST)**

Email to kilbaha@gmail.com

Flying with Factorisation

Everything about factorisation for High Schools

Kilbaha Education (Est. 1978) (ABN 47 065 111 373) PO Box 2227 Kew Vic 3101 Australia	Tel: (03) 9018 5376 Email: kilbaha@gmail.com Web: https://kilbaha.com.au
--	---

SCHOOL ORDER NUMBER (required) _____ **DATE** _____

NAME _____

SCHOOL _____

ADDRESS _____

POSTCODE _____ **TEL** _____

EMAIL _____

For each topic, you get

- Pre-test
- Many instructional movies
- Extensive interactive exercises
- Post-test
- School Site Licence for electronic use
- School Site Licence for printing and hard copy use

Works on any computer with the free Adobe Reader. <https://get.adobe.com/reader/>

Please mark (X) those required.

Factorisation 1		Price	Factorisation 2		Price
<input type="checkbox"/>	Common positive and negative factors	\$20	<input type="checkbox"/>	Quadratic trinomials	\$20
<input type="checkbox"/>	Taking out a highest common factor	\$20	<input type="checkbox"/>	Quadratic trinomials (more difficult)	\$20
<input type="checkbox"/>	Common factor is a letter	\$20	<input type="checkbox"/>	Factorising using grouping	\$20
<input type="checkbox"/>	Difference of a pair of squares	\$20	<input type="checkbox"/>	Factorising over the real number field	\$20
<input type="checkbox"/>	Difference of a pair of squares (more complex)	\$20	<input type="checkbox"/>	Factorising cubics	\$20

Total Amount = \$ _____ **(All prices include GST)**

Email to kilbaha@gmail.com

Flying with Senior Mathematics

Important topics for Years 11 and 12

Kilbaha Education (Est. 1978) (ABN 47 065 111 373) PO Box 2227 Kew Vic 3101 Australia	Tel: (03) 9018 5376 Email: kilbaha@gmail.com Web: https://kilbaha.com.au
--	---

SCHOOL ORDER NUMBER (required) _____ **DATE** _____

NAME _____

SCHOOL _____

ADDRESS _____

POSTCODE _____ **TEL** _____

EMAIL _____

For each topic, you get

- 25 multiple choice questions
- Automatically marked
- Instructional movies providing detailed explanations of the answers
- School Site Licence for electronic use
- School Site Licence for printing and hard copy use

Works on any computer with the free Adobe Reader. <https://get.adobe.com/reader/>

Please mark (X) those required.

Topic	Price	Topic	Price
Binomial expansion	\$20	Integration	\$20
Logarithms	\$20	Applications of differentiation and integration	\$20
Exponentials	\$20	Discrete random variables	\$20
Trigonometric functions	\$20	Normal, binomial and hypergeometric distributions	\$20
Functions and inverses	\$20	Graphs	\$20
Differentiation	\$20		

Total Amount = \$ _____ **(All prices include GST)**

Email to kilbaha@gmail.com

Flying with Shapes



Everything about shapes. Audio in English, Text in English.

Kilbaha Education (Est. 1978) (ABN 47 065 111 373) PO Box 2227 Kew Vic 3101 Australia	Tel: (03) 9018 5376 Email: kilbaha@gmail.com Web: https://kilbaha.com.au
--	---

SCHOOL ORDER NUMBER (required) _____ **DATE** _____

NAME _____

SCHOOL _____

ADDRESS _____

POSTCODE _____ **TEL** _____

EMAIL _____

For each section, you get Lesson Plans, Instructional Movies, Interactive Exercises, Assessment


Please mark (X) those required.

Shapes 1		Price	Shapes 2		Price
<ul style="list-style-type: none"> • Recognition of simple shapes • Sorting objects according to shape • Examination of the edges of simple shapes • Copy representations of simple patterns • Counting shapes within shapes • Assessment 		\$30	<ul style="list-style-type: none"> • Recognition of a shape from a description • Recognition of shapes • Sorting 2D and 3D objects • Congruent shapes • Construct representations of shapes • Flip, slide and turn shapes • Symmetry • Create simple spatial pictures • Assessment 		\$30
Shapes 3		Price	Shapes 4		Price
<ul style="list-style-type: none"> • Recognition of lines and right angles • Recognition of shapes • Understanding: face, edge, vertex, angle • Identify faces, vertices, edges in 3D objects • Recognise shapes from descriptions • Prisms • Cross sections • Observing 3D shapes from different positions • Looking at objects from different positions • Nets • Tessellation • Lines of symmetry • Assessment 		\$30	<ul style="list-style-type: none"> • Recognition of angles and parallel lines • Quadrilaterals, triangles and 3D shapes • Nets • Small cubes making larger cubes • Symmetry • Transformations • Enlargements of 2D and 3D shapes • Assessment 		\$30

Total Amount = \$ _____ **(All prices include GST)**

Email to kilbaha@gmail.com

Flying with Shapes



Everything about shapes. Audio in Japanese, Text in English.

Kilbaha Education (Est. 1978) (ABN 47 065 111 373) PO Box 2227 Kew Vic 3101 Australia	Tel: (03) 9018 5376 Email: kilbaha@gmail.com Web: https://kilbaha.com.au
--	---

SCHOOL ORDER NUMBER (required) _____ **DATE** _____

NAME _____

SCHOOL _____

ADDRESS _____

POSTCODE _____ **TEL** _____

EMAIL _____

For each section, you get Lesson Plans, Instructional Movies, Interactive Exercises, Assessment

Please mark (X) those required.

Shapes 1		Price	Shapes 2		Price
<ul style="list-style-type: none"> • Recognition of simple shapes • Sorting objects according to shape • Examination of the edges of simple shapes • Copy representations of simple patterns • Counting shapes within shapes • Assessment 		\$30	<ul style="list-style-type: none"> • Recognition of a shape from a description • Recognition of shapes • Sorting 2D and 3D objects • Congruent shapes • Construct representations of shapes • Flip, slide and turn shapes • Symmetry • Create simple spatial pictures • Assessment 		\$30
Shapes 3		Price	Shapes 4		Price
<ul style="list-style-type: none"> • Recognition of lines and right angles • Recognition of shapes • Understanding: face, edge, vertex, angle • Identify faces, vertices, edges in 3D objects • Recognise shapes from descriptions • Prisms • Cross sections • Observing 3D shapes from different positions • Looking at objects from different positions • Nets • Tessellation • Lines of symmetry • Assessment 		\$30	<ul style="list-style-type: none"> • Recognition of angles and parallel lines • Quadrilaterals, triangles and 3D shapes • Nets • Small cubes making larger cubes • Symmetry • Transformations • Enlargements of 2D and 3D shapes • Assessment 		\$30

Total Amount = \$ _____ **(All prices include GST)**

Email to kilbaha@gmail.com

LEGACY MATHEMATICS TEXTS

Detailed Answers

Kilbaha Education (Est. 1978) (ABN 47 065 111 373) PO Box 2227 Kew Vic 3101 Australia	Tel: (03) 9018 5376 Email: kilbaha@gmail.com Web: https://kilbaha.com.au
--	---

SCHOOL ORDER NUMBER (required) _____ **DATE** _____

NAME _____

SCHOOL _____

ADDRESS _____

POSTCODE _____ **TEL** _____

EMAIL _____

- Detailed worked solutions to questions in these well-known Mathematics Text Books.
- These worked solutions are great resources for students studying mathematics.

Please mark (X) those required.

	Detailed worked solutions to Legacy Mathematics Texts (number of pages of worked solutions in brackets)	The books with the questions can be obtained at the links below.	Price
	Pure Mathematics (774)	http://trove.nla.gov.au/version/11592393	\$49.95
	Applied Mathematics (444)	http://trove.nla.gov.au/version/45425889	\$49.95
	Mathematics A (919)	https://trove.nla.gov.au/work/19103580?keyword=0701619279	\$49.95
	Mathematics B (1141)	http://trove.nla.gov.au/version/45427691	\$49.95
	Mathematical Methods (598)	http://trove.nla.gov.au/version/29722426 http://trove.nla.gov.au/version/18258645	\$49.95
	Specialist Mathematics (861)	http://trove.nla.gov.au/version/45477957 http://trove.nla.gov.au/version/45625913	\$49.95

Total Amount = \$ _____ **(All prices include GST)**

Email to kilbaha@gmail.com

NEW SENIOR MATHEMATICS

Detailed Answers

Kilbaha Education (Est. 1978) (ABN 47 065 111 373) PO Box 2227 Kew Vic 3101 Australia	Tel: (03) 9018 5376 Email: kilbaha@gmail.com Web: https://kilbaha.com.au
--	---

SCHOOL ORDER NUMBER (required) _____ **DATE** _____

NAME _____


SCHOOL _____

ADDRESS _____


POSTCODE _____ **TEL** _____

EMAIL _____

The questions for these detailed answers are contained in the books:



NEW SENIOR MATHEMATICS
Four Unit Course for Year 12
J.B. Fitzpatrick
ISBN 0 85859 569 9
<https://trove.nla.gov.au/work/6673074>



NEW SENIOR MATHEMATICS
Three Unit Course for Years 11 & 12
J.B. Fitzpatrick
ISBN 0 85859 353 X
<https://trove.nla.gov.au/work/21897325>

Please mark (X) those required.

	Detailed Answers to New Senior Mathematics: Four Unit Course for Year 12	Price		Detailed Answers to New Senior Mathematics: Three Unit Course for Years 11 & 12	Price
	1. Graphs	\$19.80		1. Permutations and Combinations	\$19.80
	2. Complex numbers	\$19.80		2. Inverse Trigonometric Functions	\$19.80
	3. Conics	\$19.80		3. Applications of Calculus to the World	\$19.80
	4. Integration	\$19.80		4. Polynomials	\$19.80
	5. Volumes	\$19.80		5. Calculus	\$19.80
	6. Mechanics	\$19.80		6. Miscellaneous	\$19.80
	7. Polynomials	\$19.80			
	8. Advanced 3 Unit Topics	\$19.80			

Number of chapter solutions = _____ @ \$19.80 = \$ _____

Total Amount = \$ _____ (All prices include GST)

Email to kilbaha@gmail.com

MODERN MATHEMATICS 6

PURE MATHEMATICS

Detailed Answers

Kilbaha Education (Est. 1978) (ABN 47 065 111 373) PO Box 2227 Kew Vic 3101 Australia	Tel: (03) 9018 5376 Email: kilbaha@gmail.com Web: https://kilbaha.com.au
--	---

SCHOOL ORDER NUMBER (required) _____ **DATE** _____

NAME _____

SCHOOL _____

ADDRESS _____

POSTCODE _____ **TEL** _____

EMAIL _____

Detailed worked solutions to questions in this well known Mathematics Text Book.
 This is a great resource for students revising for end of year mathematics examinations.
 The questions for these detailed answers are contained in this book:

MODERN MATHEMATICS 6 PURE MATHEMATICS

J.B. Fitzpatrick and P.L. Galbraith

First Published 1971 by THE JACARANDA PRESS

Third Edition 1980

ISBN 0 7016 1410 2

The book with the questions can be obtained here:
<http://trove.nla.gov.au/version/11592393>

Please mark (X) those required.

Detailed Answers to these Chapters		Price	Detailed Answers to these Chapters		Price
	1. Basic Algebra	\$5		8. Logarithmic and Exponential Functions	\$5
	2. Algebra of Functions	\$5		9. Analytical Geometry	\$5
	3. Circular and Inverse Circular Functions	\$5		12. Permutations and Combinations	\$5
	4. Differential Calculus	\$5		13. Probability	\$5
	5. Curve Sketching. Maxima and Minima	\$5		14. Normal Distribution	\$5
	6. Derivatives of Circular & Inverse Circular Functions	\$5		15. Binomial and Hypergeometric Distributions	\$5
	7. Antidifferentiation and Integral Calculus	\$5		16. Poisson Distribution	\$5

Total Amount = \$ _____ **(All prices include GST)**

Email to kilbaha@gmail.com

MODERN MATHEMATICS 6 APPLIED MATHEMATICS Detailed Answers

Kilbaha Education (Est. 1978) (ABN 47 065 111 373) PO Box 2227 Kew Vic 3101 Australia	Tel: (03) 9018 5376 Email: kilbaha@gmail.com Web: https://kilbaha.com.au
--	---

SCHOOL ORDER NUMBER (required) _____ **DATE** _____

NAME _____

SCHOOL _____

ADDRESS _____

POSTCODE _____ **TEL** _____

EMAIL _____

Detailed worked solutions to questions in this well known Mathematics Text Book.
This is a great resource for students revising for end of year mathematics examinations.
The questions for these detailed answers are contained in this book:

MODERN MATHEMATICS 6 APPLIED MATHEMATICS

J.B. Fitzpatrick and P.L. Galbraith

First Published 1972 by THE JACARANDA PRESS

Third Edition 1980

ISBN 0 7016 1411 0

The book with the questions can be obtained here:
<http://trove.nla.gov.au/version/45425889>

Please mark (X) those required.

	Detailed Answers to these Chapters	Price		Detailed Answers to these Chapters	Price
	1. Introduction to Vectors	\$5		7. Statics of a Particle	\$5
	2. Position Vectors and Applications	\$5		8. Statics of a Rigid Body	\$5
	3. Scalar Product of Vectors	\$5		9. Dynamics	\$5
	4. Applications of Differentiation	\$5		10. Circular Motion	\$5
	5. Kinematics	\$5		11. Hooke's Law and Simple Harmonic Motion	\$5
	6. Vector Calculus and Projectile Motion	\$5			

Total Amount = \$ _____ **(All prices include GST)**

Email to kilbaha@gmail.com

CHANGE AND APPROXIMATION

Detailed Answers

Kilbaha Education (Est. 1978) (ABN 47 065 111 373) PO Box 2227 Kew Vic 3101 Australia	Tel: (03) 9018 5376 Email: kilbaha@gmail.com Web: https://kilbaha.com.au
--	---

SCHOOL ORDER NUMBER (required) _____ **DATE** _____

NAME _____

SCHOOL _____

ADDRESS _____

POSTCODE _____ **TEL** _____

EMAIL _____

Detailed worked solutions to questions in this well known Mathematics Text Book.
This is a great resource for students revising for end of year mathematics examinations.
The questions for these detailed answers are contained in this book:

CHANGE AND APPROXIMATION

J.B. Fitzpatrick, P.L. Galbraith, Bruce Henry
Published 1989 by HEINEMANN EDUCATIONAL AUSTRALIA
ISBN 0858595257

The book with the questions can be obtained here:
<http://trove.nla.gov.au/version/45224072>

Please mark (X) those required.

	Detailed Answers to these Chapters (Number of questions shown in brackets)	Price		Detailed Answers to these Chapters (Number of questions shown in brackets)	Cost
	1. Algebra (216)	\$5		8. Discrete Random Variables (52)	\$5
	2. Functions (217)	\$5		9. Binomial & Hypergeometric Distributions (146)	\$5
	3. Circular Functions (451)	\$5		10. Normal Distribution (74)	\$5
	4. Differential Calculus (229)	\$5		11. Sampling and Estimation (69)	\$5
	5. Applications of Differentiation (146)	\$5		Revision Exercises A, B and C (126)	\$5
	6. Integral Calculus (76)	\$5		CATS Multiple Choice and Analysis Tasks (123)	\$5
	7. Exponential and Logarithmic Functions (210)	\$5			

Total Amount = \$ _____ **(All prices include GST)**

Email to kilbaha@gmail.com

REASONING AND DATA

Detailed Answers

Kilbaha Education (Est. 1978) (ABN 47 065 111 373) PO Box 2227 Kew Vic 3101 Australia	Tel: (03) 9018 5376 Email: kilbaha@gmail.com Web: https://kilbaha.com.au
--	---

SCHOOL ORDER NUMBER (required) _____ **DATE** _____

NAME _____

SCHOOL _____

ADDRESS _____

POSTCODE _____ **TEL** _____

EMAIL _____

Detailed worked solutions to questions in this well known Mathematics Text Book.
 This is a great resource for students revising for end of year mathematics examinations.
 The questions for these detailed answers are contained in this book:

REASONING AND DATA

J.B. Fitzpatrick, P.L. Galbraith, Bruce Henry
 Published 1990 by HEINEMANN EDUCATIONAL AUSTRALIA
 ISBN 0858595273

The book with the questions can be obtained here:

<http://trove.nla.gov.au/version/45226812>

Please mark (X) those required.

Detailed Answers to these Chapters (Number of questions shown in brackets)		Price	Detailed Answers to these Chapters (Number of questions shown in brackets)		Price
1. Algebra (216)		\$5	8. Discrete Random Variables (52)		\$5
2. Functions (217)		\$5	9. Binomial & Hypergeometric Distributions (146)		\$5
3. Circular Functions (451)		\$5	10. Normal Distribution (74)		\$5
4. Differential Calculus (229)		\$5	11. Sampling and Estimation (69)		\$5
5. Applications of Differentiation (146)		\$5	Revision Exercises A, B and C (126)		\$5
6. Integral Calculus (76)		\$5	CATS Multiple Choice and Analysis Tasks (123)		\$5
7. Exponential and Logarithmic Functions (210)		\$5			

Total Amount = \$ _____ **(All prices include GST)**

Email to kilbaha@gmail.com

MATHEMATICS A YEAR 12

Detailed Answers

Kilbaha Education (Est. 1978) (ABN 47 065 111 373) PO Box 2227 Kew Vic 3101 Australia	Tel: (03) 9018 5376 Email: kilbaha@gmail.com Web: https://kilbaha.com.au
--	---

SCHOOL ORDER NUMBER (required) _____ **DATE** _____

NAME _____

SCHOOL _____

ADDRESS _____

POSTCODE _____ **TEL** _____

EMAIL _____

Detailed worked solutions to questions in this well known Mathematics Text Book.
 This is a great resource for students revising for end of year mathematics examinations.
 The questions for these detailed answers are contained in this book:

MATHEMATICS A YEAR 12

J.B. Fitzpatrick and P.L. Galbraith

First Published 1985 by THE JACARANDA PRESS

ISBN 0 7016 1927 9

The book with the questions can be obtained here:

<https://trove.nla.gov.au/work/19103580?key=word=0701619279>

Please mark (X) those required.

	Detailed Answers to these Chapters	Price		Detailed Answers to these Chapters	Price
	1. Mensuration	\$5		10. Arrangements and Selections	\$5
	2. Algebra of Functions	\$5		11. Binomial and Hypergeometric Distributions	\$5
	3. Circular (trigonometric) Functions	\$5		12. Geometric and Poisson Distributions	\$5
	Revision Exercises A	\$5		Revision Exercises C	\$5
	4. Differential Calculus	\$5		Test Papers	\$5
	5. Rates of Change	\$5		13. Variation	\$5
	6. Curve Sketching: Maxima and Minima	\$5		14. Sequences and Series	\$5
	7. Antidifferentiation and Integral Calculus	\$5		15. Exponential Growth	\$5
	8. Exponential and Logarithmic Functions	\$5		16. Linear Programming	\$5
	Revision Exercises B	\$5		17. Sequences & Series (arithmetic & geometric)	\$5
	9. Probability	\$5		18. Time Series	\$5

Total Amount = \$ _____ **(All prices include GST)**

Email to kilbaha@gmail.com

MATHEMATICS B YEAR 12

Detailed Answers

Kilbaha Education (Est. 1978) (ABN 47 065 111 373) PO Box 2227 Kew Vic 3101 Australia	Tel: (03) 9018 5376 Email: kilbaha@gmail.com Web: https://kilbaha.com.au
--	---

SCHOOL ORDER NUMBER (required) _____ **DATE** _____

NAME _____

SCHOOL _____

ADDRESS _____

POSTCODE _____ **TEL** _____

EMAIL _____

Detailed worked solutions to questions in this well known Mathematics Text Book.
 This is a great resource for students revising for end of year mathematics examinations.
 The questions for these detailed answers are contained in this book:

MATHEMATICS B YEAR 12

J.B. Fitzpatrick and P.L. Galbraith

First Published 1985 by THE JACARANDA PRESS

ISBN 0 7016 1928 7

The book with the questions can be obtained here:

<http://trove.nla.gov.au/version/45427691>

Please mark (X) those required.

	Detailed Answers to these Chapters	Price		Detailed Answers to these Chapters	Price
	1. Linear Algebra	\$5		Revision Exercises B	\$5
	2. Complex Numbers	\$5		Test Papers	\$5
	3. Introduction to Vectors	\$5		12. Projectile Motion and Circular Motion	\$5
	4. Scalar Product of Vectors	\$5		13. Hooke's Law and Simple Harmonic Motion	\$5
	Revision Exercises A	\$5		Revision Exercises M	\$5
	5. Antidifferentiation and Integral Calculus	\$5		14. Continuous Probability Distributions	\$5
	6. Differential Equations	\$5		15. Transformation Geometry	\$5
	7. Kinematics	\$5		17. Logic and Reasoning	\$5
	8. Analytical Geometry	\$5			

Total Amount = \$ _____ **(All prices include GST)**

Email to kilbaha@gmail.com

MATHEMATICAL METHODS

UNITS 3 AND 4

Detailed Answers

Kilbaha Education (Est. 1978) (ABN 47 065 111 373) PO Box 2227 Kew Vic 3101 Australia	Tel: (03) 9018 5376 Email: kilbaha@gmail.com Web: https://kilbaha.com.au
--	---

SCHOOL ORDER NUMBER (required) _____ **DATE** _____

NAME _____

SCHOOL _____

ADDRESS _____

POSTCODE _____ **TEL** _____

EMAIL _____

Detailed worked solutions to questions in these well known Mathematics Text Books.
This is a great resource for students revising for end of year mathematics examinations.
The questions for these detailed answers are contained in these books:

MATHEMATICAL METHODS 3 AND 4

J.B. Fitzpatrick, P.L. Galbraith, Bruce Henry
First Published 1993 by RIGBY HEINEMANN
First Edition 1993 ISBN 0 85859 698 9
Second Edition 1997 ISBN 0 85859 935 X

The books with the questions can be obtained here:

<http://trove.nla.gov.au/version/29722426>
<http://trove.nla.gov.au/version/18258645>

Please mark (X) those required.

	Detailed Answers to these Chapters (Number of questions shown in brackets)	Price		Detailed Answers to these Chapters (Number of questions shown in brackets)	Price
	1. Algebra (216)	\$5		8. Discrete Random Variables (52)	\$5
	2. Functions (217)	\$5		9. Binomial & Hypergeometric Distributions (146)	\$5
	3. Circular Functions (451)	\$5		10. Normal Distribution (74)	\$5
	4. Differential Calculus (229)	\$5		11. Sampling and Estimation (69)	\$5
	5. Applications of Differentiation (146)	\$5		Revision Exercises A, B and C (126)	\$5
	6. Integral Calculus (76)	\$5		CATS Multiple Choice and Analysis Tasks (123)	\$5
	7. Exponential and Logarithmic Functions (210)	\$5		Detailed answers to the new problems in the second edition of Mathematical Methods 3 and 4 (58 pages)	\$5

Total Amount = \$ _____ **(All prices include GST)**

Email to kilbaha@gmail.com

SPECIALIST MATHEMATICS UNITS 3 AND 4 Detailed Answers

Kilbaha Education (Est. 1978) (ABN 47 065 111 373) PO Box 2227 Kew Vic 3101 Australia	Tel: (03) 9018 5376 Email: kilbaha@gmail.com Web: https://kilbaha.com.au
--	---

SCHOOL ORDER NUMBER (required) _____ **DATE** _____

NAME _____

SCHOOL _____

ADDRESS _____

POSTCODE _____ **TEL** _____

EMAIL _____

Detailed worked solutions to questions in these well known Mathematics Text Books.
This is a great resource for students revising for end of year mathematics examinations.
The questions for these detailed answers are contained in these books:

SPECIALIST MATHEMATICS

J.B. Fitzpatrick, P.L. Galbraith, Bruce Henry
First Published 1993 by RIGBY HEINEMANN
First Edition 1993 ISBN 0 85859 697 0
Second Edition 1997 ISBN 0 86462 080 2

The books with the questions can be obtained here:

<http://trove.nla.gov.au/version/45477957>

<http://trove.nla.gov.au/version/45625913>

Please mark (X) those required.

Detailed Answers to these Chapters (First Edition) (Number of questions shown in brackets)	Price	Detailed Answers to these Chapters (First Edition) (Number of questions shown in brackets)	Price
1. Circular Functions (217)	\$5	12. Dynamics (191)	\$5
2. Complex Numbers (256)	\$5	13. Statics (48)	\$5
3. Vectors (246)	\$5	14. Vector Calculus (135)	\$5
4. Rational Functions (46)	\$5	15. Simple Harmonic Motion (84)	\$5
5. Differentiation and Antidifferentiation (234)	\$5	Revision Exercise A (40)	\$5
6. Integral Calculus (242)	\$5	Revision Exercise B (81)	\$5
7. Differential Equations (173)	\$5	CATS Multiple Choice and Analysis Tasks (78)	\$5
8. Kinematics (190)	\$5	Detailed answers to the new problems in the second edition of Specialist Mathematics (88 pages)	\$5

Total Amount = \$ _____ **(All prices include GST)**

Email to kilbaha@gmail.com

Buy and download immediately at <https://kilbaha.com.au>



Kilbaha Education

Quality educational content

AUTHORITY TO CHARGE

STRICTLY CONFIDENTIAL

I hereby authorise Kilbaha Education to debit the following credit card for charges relating to the attached order or the order requested by other means.

Kilbaha Education (Est. 1978) ABN 47 065 111 373
PO Box 2227
Kew Vic 3101
Australia

Tel: +613 9018 5376

Email: kilbaha@gmail.com

Web: <https://kilbaha.com.au>

SCHOOL ORDER NUMBER (if applicable) _____ DATE _____

NAME _____

SCHOOL (if applicable) _____

ADDRESS _____

POSTCODE _____ TEL _____

EMAIL _____

CARD TYPE: **MASTERCARD**

VISA

CARD NO: _____ EXP: _____ / _____

3 DIGIT SECURITY CODE ON CARD _____

NAME AS SHOWN ON CARD _____

SIGNATURE OR NAME TYPED _____

AMOUNT AUD\$ _____ AMOUNT (other currency) _____

Email to: kilbaha@gmail.com

or

Mail to: PO Box 2227 Kew Vic 3101 Australia