

Buy and download immediately at <https://kilbaha.com.au>

| | |
|---|--|
| <p>Kilbaha Education PO Box 2227 Kew Vic 3101 Australia Tel: +613 9018 5376 Email: kilbaha@gmail.com Web1: https://kilbaha.com.au Web2: https://naplan.blogspot.com</p> | <p>Bill Healy BSc BA Dip Ed CEO Mobile: +61 (0)413 425 374</p> |
|---|--|



Kilbaha Education

Quality educational content

2022 Catalogue Mathematics

Kilbaha Pty Ltd (Est. 1978)
ABN: 47 065 111 373

Quality resources to schools and students since 1978

- Kilbaha helps schools
- to teach better
- by providing quality educational content
- so that students get higher grades.

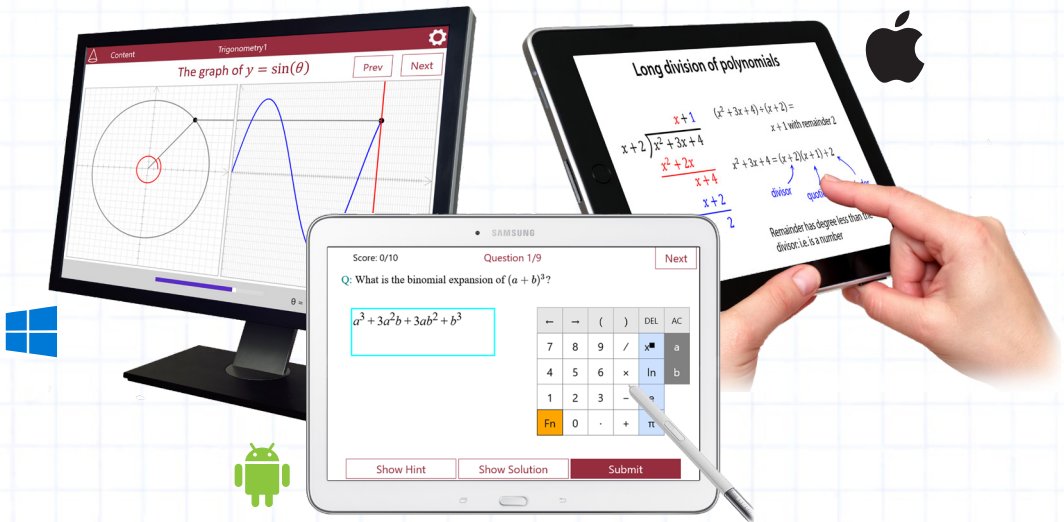
For complete catalogue always go to <https://kilbaha.com.au/kilbaha.pdf>

Buy and download immediately at <https://kilbaha.com.au>



SUMMATIC

FOR VCE MATHS



INTELLIGENT ASSESSMENT AND
SUPPORT FOR YOUR STUDENTS

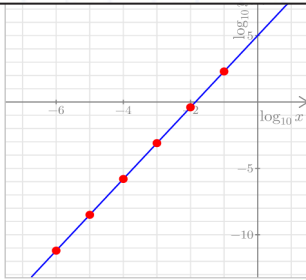


Kilbaha Education

Quality educational content

AUTOMATED ASSESSMENTS

Including years of Kilbaha VCE trial exams and questions



$c =$

$m =$

The data plotted above are approximately linear.

Q9.1: Use the sliders to find the intercept and gradient; hence write an equation for y in terms of x .

a) What is the gradient of the line?

Give a line of working or a final answer. Give your final answer to 1 decimal place.



ADVANCED MATHS QUESTIONS

Full range of question types

Q13.1: A person receives satisfaction $(c^3 + s^3)^3$ from coffee c and sugar s .

a) If the person wishes to get 8 units of satisfaction, give an equation relating s and c .

$$(c^3 + s^3)^3 = 8$$

✓ -/1

Simplify your answer.

Give a line of working or a final answer.

$$\Leftrightarrow \boxed{} = \boxed{}$$



b) Find $\frac{ds}{dc}$ on the curve given by this equation in terms of c only.

Give a line of working or a final answer.



Related Content

Implicit Differentiation

[View](#)

Assign homework using our in-app past papers and question generator. Our platform creates new variants of questions for unlimited practice.

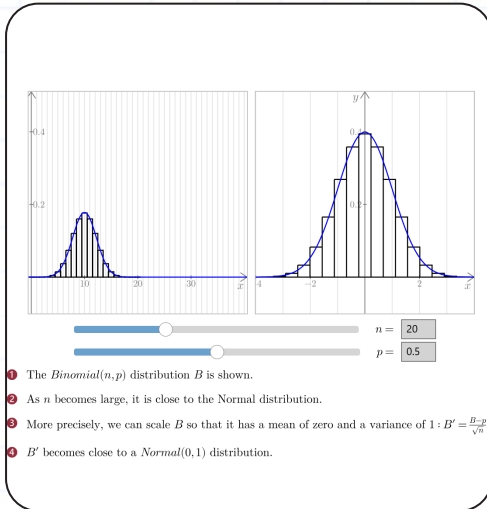
Marking is automatic and step-by-step feedback instant. Students receive valuable feedback whilst saving teacher time.

Our technology can reliably mark formulas, arguments, matrices, equations and more.

Students learn through practice with feedback and hints, and can access linked resources when they get stuck.

INTERACTIVE AND DYNAMIC

For inside and outside of the classroom



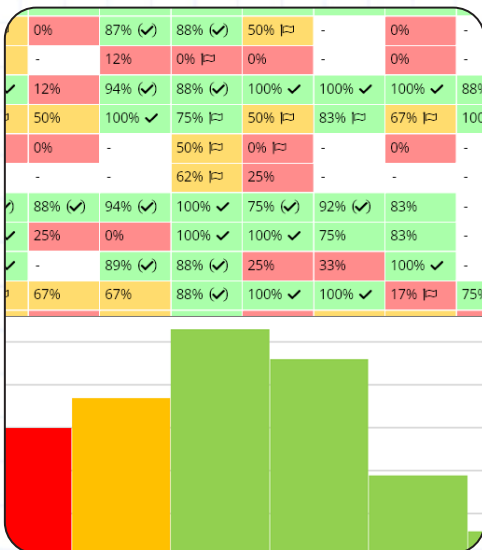
Interactive graphs break complex topics down and cater for a variety of learning styles.

Allowing students to adjust sliders, sample random data and input formulas helps them to understand maths visually.

Ideal for class demonstrations and independent study.

EFFORTLESS MANAGEMENT

View clear evidence of progression and preparedness



Our markbook feature gives you the chance to clearly monitor progress of all students in one place.

View attempts and use our analytics to learn more about the developing ability of your students.

READY TO GET STARTED FOR THE NEW YEAR?

Get started now in a few simple steps!

Combined material from Kilbaha Education and Summatic, covering all three VCE levels.

Contact Kilbaha Education at **kilbaha@gmail.com** to get set up with either full academic year access, or for an individual diagnostic test or assignment.



Dr. Charles Roddie



Dr. Kevin Crooks



Daniel Appleby



Angela Lim



<https://summatic.co.uk>



contact@summatic.co.uk



(+44) 01223 338887



Interactive VCE Mathematics 2022

| | |
|---|--|
| Kilbaha Education (Est. 1978) (ABN 47 065 111 373) PO Box 2227 Kew Vic 3101 Australia | Tel: (03) 9018 5376 Email: kilbaha@gmail.com Web: https://kilbaha.com.au |
|---|--|

SCHOOL ORDER NUMBER (required) _____ **DATE** _____

NAME _____

SCHOOL _____

ADDRESS _____

POSTCODE _____ **TEL** _____

EMAIL _____

- Intelligent automated assessment and support for your students
- Includes years of Kilbaha VCE Trial Exams and Questions
- Covers Further Mathematics, Mathematical Methods and Specialist Mathematics
- Choose from Full Academic Year Access, Diagnostic Tests, Individual Assignments
- Download the Summative App for your smart device from Apple or Google
- More information on the use of Summative by UK schools here: <https://summative.co.uk>

Please mark (X) those required.

For the Conference Price, order must be received before 30th January 2022.

| | Service required | Price | MAV21 Conference Price |
|--|--|-------------------------------|---------------------------|
| | Full Academic Year Access for up to 150 students | \$1500 | \$1200 |
| | Full Academic Year Access for more than 150 students | <i>Contact us for a quote</i> | |
| | Diagnostic Test on one selected topic <i>Please specify all the topics you require.</i> | \$100 | \$75 |
| | Individual Assignment on one selected topic <i>Please specify all the topics you require.</i> | \$75 | \$50 |

Total Amount = \$ _____ (All prices include GST)

Email to kilbaha@gmail.com

Buy and download immediately at <https://kilbaha.com.au>

2022 Kilbaha VCE Mathematics Trial Examinations Current Study Design (2016-2022)

| | |
|--|--|
| Kilbaha Education (Est. 1978) (ABN 47 065 111 373) PO Box 2227 Kew Vic 3101 Australia | Tel: (03) 9018 5376 Email: kilbaha@gmail.com Web: https://kilbaha.com.au |
|--|--|

SCHOOL ORDER NUMBER (required) _____ DATE _____

NAME _____

SCHOOL _____

ADDRESS _____

POSTCODE _____ TEL _____

EMAIL _____

Please mark (X) those required.

| | | |
|--|--|------|
| | <ul style="list-style-type: none"> Kilbaha VCE Mathematics Trial Examinations for Units 3 and 4 with detailed answers. All files are provided in WORD format for easy editing and PDF format for easy printing. All of these Trial Exams are for the current Study Design (2016-2022) (2020 was modified) School site licence for distribution to students in both printed and electronic formats | |
| | 2022 VCE Further Mathematics Units 3 and 4 Trial Exam 1 (VCAA approved technology) | \$85 |
| | 2022 VCE Further Mathematics Units 3 and 4 Trial Exam 2 (VCAA approved technology) | \$85 |
| | 2022 VCE Mathematical Methods Units 3 and 4 Trial Exam 1 (technology free) | \$85 |
| | 2022 VCE Mathematical Methods Units 3 and 4 Trial Exam 2 (VCAA approved technology) | \$85 |
| | 2022 VCE Specialist Mathematics Units 3 and 4 Trial Exam 1 (technology free) | \$85 |
| | 2022 VCE Specialist Mathematics Units 3 and 4 Trial Exam 2 (VCAA approved technology) | \$85 |
| | 2016, 2017, 2018, 2019, 2020, 2021 VCE Further Mathematics Units 3 and 4 Trial Exams 1 <i>Six different, complete Trial Exams with detailed answers.</i> | \$85 |
| | 2016, 2017, 2018, 2019, 2020, 2021 VCE Further Mathematics Units 3 and 4 Trial Exams 2 <i>Six different, complete Trial Exams with detailed answers.</i> | \$85 |
| | 2016, 2017, 2018, 2019, 2020, 2021 VCE Mathematical Methods Units 3 and 4 Trial Exams 1 <i>Six different, complete Trial Exams with detailed answers.</i> | \$85 |
| | 2016, 2017, 2018, 2019, 2020, 2021 VCE Mathematical Methods Units 3 and 4 Trial Exams 2 <i>Six different, complete Trial Exams with detailed answers.</i> | \$85 |
| | 2016, 2017, 2018, 2019, 2020, 2021 VCE Specialist Mathematics Units 3 and 4 Trial Exams 1 <i>Six different, complete Trial Exams with detailed answers.</i> | \$85 |
| | 2016, 2017, 2018, 2019, 2020, 2021 VCE Specialist Mathematics Units 3 and 4 Trial Exams 2 <i>Six different, complete Trial Exams with detailed answers.</i> | \$85 |

Total Amount = \$ _____ (All prices include GST)

Email to kilbaha@gmail.com

Detailed Answers

VCAA VCE Mathematics Examinations

| | |
|---|---|
| Kilbaha Education (Est. 1978) (ABN 47 065 111 373) PO Box 2227 Kew Vic 3101 Australia | Tel: (03) 9018 5376 Email: kilbaha@gmail.com Web: https://kilbaha.com.au |
|---|---|

SCHOOL ORDER NUMBER (required) _____ DATE _____

NAME _____

SCHOOL _____

ADDRESS _____

POSTCODE _____ TEL _____

EMAIL _____

Supplied in WORD format for easy editing and PDF format for easy printing.

Please mark (X) those required.

| Detailed answers to VCAA VCE Exams Current Study Design 2016 – 2022 | | Cost | | Detailed answers to VCAA VCE Exams Current Study Design 2016 – 2022 | | Cost |
|--|------------------------------------|------|--|--|---------------------------------------|------|
| | 2021 VCAA VCE Maths Methods Exam 1 | \$20 | | | 2021 VCAA VCE Specialist Maths Exam 1 | \$20 |
| | 2021 VCAA VCE Maths Methods Exam 2 | \$20 | | | 2021 VCAA VCE Specialist Maths Exam 2 | \$20 |
| | 2020 VCAA VCE Maths Methods Exam 1 | \$20 | | | 2020 VCAA VCE Specialist Maths Exam 1 | \$20 |
| | 2020 VCAA VCE Maths Methods Exam 2 | \$20 | | | 2020 VCAA VCE Specialist Maths Exam 2 | \$20 |
| | 2019 VCAA VCE Maths Methods Exam 1 | \$20 | | | 2019 VCAA VCE Specialist Maths Exam 1 | \$20 |
| | 2019 VCAA VCE Maths Methods Exam 2 | \$20 | | | 2019 VCAA VCE Specialist Maths Exam 2 | \$20 |
| | 2018 VCAA VCE Maths Methods Exam 1 | \$20 | | | 2018 VCAA VCE Specialist Maths Exam 1 | \$20 |
| | 2018 VCAA VCE Maths Methods Exam 2 | \$20 | | | 2018 VCAA VCE Specialist Maths Exam 2 | \$20 |
| | 2017 VCAA VCE Maths Methods Exam 1 | \$20 | | | 2017 VCAA VCE Specialist Maths Exam 1 | \$20 |
| | 2017 VCAA VCE Maths Methods Exam 2 | \$20 | | | 2017 VCAA VCE Specialist Maths Exam 2 | \$20 |
| | 2016 VCAA VCE Maths Methods Exam 1 | \$20 | | | 2016 VCAA VCE Specialist Maths Exam 1 | \$20 |
| | 2016 VCAA VCE Maths Methods Exam 2 | \$20 | | | 2016 VCAA VCE Specialist Maths Exam 2 | \$20 |

| Detailed answers to VCAA VCE Exams on a Northern Hemisphere Timetable (NHT) Current Study Design 2016 – 2022 | | Cost | | Detailed answers to VCAA VCE Exams on a Northern Hemisphere Timetable (NHT) Current Study Design 2016 – 2022 | | Cost |
|--|-------------------------------------|------|--|--|--|------|
| | *2022 VCAA VCE Maths Methods Exam 1 | \$20 | | | *2022 VCAA VCE Specialist Maths Exam 1 | \$20 |
| | *2022 VCAA VCE Maths Methods Exam 2 | \$20 | | | *2022 VCAA VCE Specialist Maths Exam 2 | \$20 |
| | 2021 VCAA VCE Maths Methods Exam 1 | \$20 | | | 2021 VCAA VCE Specialist Maths Exam 1 | \$20 |
| | 2021 VCAA VCE Maths Methods Exam 2 | \$20 | | | 2021 VCAA VCE Specialist Maths Exam 2 | \$20 |
| | 2020 VCAA VCE Maths Methods Exam 1 | \$20 | | | 2020 VCAA VCE Specialist Maths Exam 1 | \$20 |
| | 2020 VCAA VCE Maths Methods Exam 2 | \$20 | | | 2020 VCAA VCE Specialist Maths Exam 2 | \$20 |
| | 2019 VCAA VCE Maths Methods Exam 1 | \$20 | | | 2019 VCAA VCE Specialist Maths Exam 1 | \$20 |
| | 2019 VCAA VCE Maths Methods Exam 2 | \$20 | | | 2019 VCAA VCE Specialist Maths Exam 2 | \$20 |
| | 2018 VCAA VCE Maths Methods Exam 1 | \$20 | | | 2018 VCAA VCE Specialist Maths Exam 1 | \$20 |
| | 2018 VCAA VCE Maths Methods Exam 2 | \$20 | | | 2018 VCAA VCE Specialist Maths Exam 2 | \$20 |
| | 2017 VCAA VCE Maths Methods Exam 1 | \$20 | | | 2017 VCAA VCE Specialist Maths Exam 1 | \$20 |
| | 2017 VCAA VCE Maths Methods Exam 2 | \$20 | | | 2017 VCAA VCE Specialist Maths Exam 2 | \$20 |

* Available September 2022

* Available September 2022

Total Amount = \$ _____ (All prices include GST)

Email to kilbaha@gmail.com

Buy and download immediately at <https://kilbaha.com.au>

2006 - 2015 Kilbaha VCE Mathematics Trial Examinations

(Old Study Design 2006 – 2015. Great resource bank of questions and answers)

| | |
|--|--|
| Kilbaha Education (Est. 1978) (ABN 47 065 111 373) PO Box 2227 Kew Vic 3101 Australia | Tel: (03) 9018 5376 Email: kilbaha@gmail.com Web: https://kilbaha.com.au |
|--|--|

SCHOOL ORDER NUMBER (required) _____ DATE _____

NAME _____

SCHOOL _____

ADDRESS _____

POSTCODE _____ TEL _____

EMAIL _____

Please mark (X) those required.

| | Kilbaha VCE Mathematics Trial Examinations with detailed answers. (Old Study Design 2006 – 2015 but great value sets of questions for class use) Supplied in WORD format for easy editing and PDF format for easy printing. | Cost |
|--------------------------|--|------|
| <input type="checkbox"/> | 2006 - 2015 VCE Further Mathematics Trial Exams 1 (10 examinations) | \$85 |
| <input type="checkbox"/> | 2006 - 2015 VCE Further Mathematics Trial Exams 2 (10 examinations) | \$85 |
| <input type="checkbox"/> | 2006 - 2015 VCE Mathematical Methods Trial Exams 1 (10 examinations) | \$85 |
| <input type="checkbox"/> | 2006 - 2015 VCE Mathematical Methods Trial Exams 2 (10 examinations) | \$85 |
| <input type="checkbox"/> | 2006 - 2015 VCE Specialist Mathematics Trial Exams 1 (10 examinations) | \$85 |
| <input type="checkbox"/> | 2006 - 2015 VCE Specialist Mathematics Trial Exams 2 (10 examinations) | \$85 |

| ✓ | Kilbaha detailed answers to VCAA VCE Examinations. (Old Study Design 2006 – 2015 but great value detailed answers for class use) Supplied in WORD format for easy editing and PDF format for easy printing. | Cost |
|--------------------------|--|------|
| <input type="checkbox"/> | Detailed answers to the 2006 - 2014 VCAA VCE Further Mathematics Exams 1 (9 examinations) | \$20 |
| <input type="checkbox"/> | Detailed answers to the 2006 - 2014 VCAA VCE Further Mathematics Exams 2 (9 examinations) | \$20 |
| <input type="checkbox"/> | Detailed answers to the 2006 - 2014 VCAA VCE Mathematical Methods Exams 1 (9 examinations) | \$20 |
| <input type="checkbox"/> | Detailed answers to the 2006 - 2014 VCAA VCE Mathematical Methods Exams 2 (9 examinations) | \$20 |
| <input type="checkbox"/> | Detailed answers to the 2006 - 2014 VCAA VCE Specialist Mathematics Exams 1 (9 examinations) | \$20 |
| <input type="checkbox"/> | Detailed answers to the 2006 - 2014 VCAA VCE Specialist Mathematics Exams 2 (9 examinations) | \$20 |

Total Amount = \$ _____ (All prices include GST)

Email to kilbaha@gmail.com



Detailed answers to the VCAA VCE Sample Maths Exams 2016 - 2022

Supplied in Microsoft WORD for easy editing and Adobe PDF for easy printing.

| | |
|--|--|
| Kilbaha Education (Est. 1978) (ABN 47 065 111 373) PO Box 2227 Kew Vic 3101 Australia | Tel: (03) 9018 5376 Email: kilbaha@gmail.com Web: https://kilbaha.com.au |
|--|--|

SCHOOL ORDER NUMBER (required) _____ DATE _____

NAME _____

SCHOOL _____

ADDRESS _____

POSTCODE _____ TEL _____

EMAIL _____

Please mark (X) those required.

| | Detailed answers to the VCAA VCE Sample Maths Exams for the Study Design 2016 – 2022 WORD and PDF formats supplied | Download the exams at these links | Price |
|--|--|---|-------|
| | 2016 - 2022 VCAA VCE Further Mathematics Sample Exam 1 | http://bit.ly/29uu15R | \$20 |
| | 2016 - 2022 VCAA VCE Further Mathematics Sample Exam 2 | | \$20 |
| | 2016 - 2022 VCAA VCE Mathematical Methods Sample Exam 1 | http://bit.ly/29vPPAj | \$20 |
| | 2016 - 2022 VCAA VCE Mathematical Methods Sample Exam 2 | | \$20 |
| | 2016 - 2022 VCAA VCE Specialist Mathematics Sample Exam 1 | http://bit.ly/29xGwiA | \$20 |
| | 2016 - 2022 VCAA VCE Specialist Mathematics Sample Exam 2 | | \$20 |

Total Amount = \$ _____ (All prices include GST)

Email to kilbaha@gmail.com



Kilbaha Education

Quality educational content

VCAA VCE MATHEMATICS EXAMINATIONS

FREE

ONLINE MULTIPLE CHOICE QUESTIONS WITH AUTOMATIC MARKING!

| | |
|--|--|
| Kilbaha Education (Est. 1978) (ABN 47 065 111 373) PO Box 2227 Kew Vic 3101 Australia | Tel: (03) 9018 5376 Email: kilbaha@gmail.com Web: https://kilbaha.com.au |
|--|--|

SCHOOL ORDER NUMBER (required) _____ DATE _____

NAME _____

SCHOOL _____

ADDRESS _____

POSTCODE _____ TEL _____

EMAIL _____

- VCAA VCE Examinations – Current study guide (2016-2022) - Multiple Choice Questions
- Original VCAA Exams with VCAA format
- Do online on any computer
- Automatic marking with percentage score
- Summary of student correct and incorrect answers for teacher analysis
- School site licence to reproduce for all students in your school

Please mark (X) those required.

| | |
|--|------|
| 2019 VCAA VCE Further Mathematics Exam 1 – 56 Multiple Choice Questions | FREE |
| 2019 VCAA VCE Mathematical Methods Exam 2 – 20 Multiple Choice Questions | FREE |
| 2019 VCAA VCE Specialist Mathematics Exam 2 – 20 Multiple Choice Questions | FREE |

BY ARRANGMENT WITH VCAA, THESE ARE FREE TO ALL SCHOOLS, TEACHERS AND STUDENTS.

Total Amount = \$0

Email to kilbaha@gmail.com

Kilbaha VCE Mathematics Unit 1 and Unit 2 Examinations (Year 11)

(Important: These resources were published in 2016)

| | |
|---|--|
| Kilbaha Education (Est. 1978) (ABN 47 065 111 373) PO Box 2227 Kew Vic 3101 Australia | Tel: (03) 9018 5376 Email: kilbaha@gmail.com Web: https://kilbaha.com.au |
|---|--|

SCHOOL ORDER NUMBER (required) _____ DATE _____

NAME _____

SCHOOL _____

ADDRESS _____

POSTCODE _____ TEL _____

EMAIL _____

Please mark (X) those required.

| | Price |
|--|-------|
| Kilbaha Examinations and Question Banks for VCE Units 1 and 2 with detailed answers. Current Study Designs (2016 – 2022) Supplied in WORD format for easy editing and PDF format for easy printing. <i>These resources were published in 2016. They are NOT new resources for 2022. Includes school site licence for distribution to students in both printed and electronic formats.</i> | |
| VCE General Mathematics Units 1 and 2 – Multiple Choice Questions for all Areas of Study | \$45 |
| VCE General Mathematics Units 1 and 2 – Short Answer Questions for all Areas of Study | \$45 |
| VCE Mathematical Methods Units 1 and 2 Examination 1 (technology free) | \$45 |
| VCE Mathematical Methods Units 1 and 2 Examination 2 (VCAA approved technology) | \$45 |
| VCE Specialist Mathematics Units 1 and 2 – Area 1 – Algebra and structure. Multiple-Choice and Short Answer | \$25 |
| VCE Specialist Mathematics Units 1 and 2 – Area 2 – Arithmetic and number. Multiple-Choice and Short Answer | \$25 |
| VCE Specialist Mathematics Units 1 and 2 – Area 3 – Discrete mathematics. Multiple-Choice and Short Answer | \$25 |
| VCE Specialist Mathematics Units 1 and 2 – Area 4 – Geometry, measurement and trigonometry. Multiple-Choice Short Answer | \$25 |
| VCE Specialist Mathematics Units 1 and 2 – Area 5 – Graphs of linear and non-linear relations Multiple-Choice and Short Answer | \$25 |
| VCE Specialist Mathematics Units 1 and 2 – Area 6 – Statistics Multiple-Choice and Short Answer | \$25 |

Total Amount = \$ _____ (All prices include GST)

Email to kilbaha@gmail.com

Kilbaha QCE External Assessment Mathematics Trial Exams and Detailed Answers

| | |
|--|---|
| Kilbaha Education (Est. 1978) (ABN 47 065 111 373) PO Box 2227 Kew Vic 3101 Australia | Tel: +613 9018 5376 Email: kilbaha@gmail.com Web: https://kilbaha.com.au |
|--|---|

SCHOOL ORDER NUMBER (required) _____ **DATE** _____

NAME _____

SCHOOL _____

ADDRESS _____

POSTCODE _____ **TEL** _____

EMAIL _____

Please mark (X) those required.

- **Kilbaha QCE External Assessment Mathematics Trial Examinations with detailed answers**
- All files are provided in WORD format for easy editing and PDF format for easy printing
- These Trial Exams are for the current Syllabi and were first produced in 2021 (They are NOT new Trial Exams for 2022)
- School site licence for distribution to students in both printed and electronic formats
- These trial examinations have no connection with and are not endorsed by the QCAA

| | |
|--|------|
| Kilbaha QCE Mathematical Methods Trial Examination Paper 1 (90 minutes + 5 minutes) including detailed answers | \$90 |
| Kilbaha QCE Mathematical Methods Trial Examination Paper 2 (90 minutes + 5 minutes) including detailed answers | \$90 |
| Kilbaha QCE Specialist Mathematics Trial Examination Paper 1 (90 minutes + 5 minutes) including detailed answers | \$90 |
| Kilbaha QCE Specialist Mathematics Trial Examination Paper 2 (90 minutes + 5 minutes) including detailed answers | \$90 |

- **Detailed answers to the 2020 QCAA QCE External Assessment Examinations**
- All files are provided in WORD format for easy editing and PDF format for easy printing
- School site licence for distribution to students in both printed and electronic formats
- These detailed answers have no connection with and are not endorsed by the QCAA

| | |
|--|------|
| Detailed answers to the 2020 QCAA QCE Mathematical Methods External Assessment Examination Paper 1 | \$20 |
| Detailed answers to the 2020 QCAA QCE Mathematical Methods External Assessment Examination Paper 2 | \$20 |
| Detailed answers to the 2020 QCAA QCE Specialist Mathematics External Assessment Examination Paper 1 | \$20 |
| Detailed answers to the 2020 QCAA QCE Specialist Mathematics External Assessment Examination Paper 2 | \$20 |

Total Amount = \$ _____ **(All prices include GST)**

Email to kilbaha@gmail.com

Buy and download immediately at <https://kilbaha.com.au>



Australian Curriculum Multiple Choice Questions Mathematics Years 9 and 10

| | |
|--|--|
| Kilbaha Education (Est. 1978) (ABN 47 065 111 373) PO Box 2227 Kew Vic 3101 Australia | Tel: (03) 9018 5376 Email: kilbaha@gmail.com Web: https://kilbaha.com.au |
|--|--|

SCHOOL ORDER NUMBER (required) _____ DATE _____

NAME _____

SCHOOL _____

ADDRESS _____

POSTCODE _____ TEL _____

EMAIL _____

Features of these Mathematics Multiple Choice Questions

- Comprehensive coverage of the Australian Curriculum for Mathematics for each level
- 99 multiple choice questions
- Detailed answers and explanations
- Number and Algebra – Questions 1 – 33
- Measurement and Geometry – Questions 34 – 66
- Statistics and Probability – Questions 67 - 99
- Supplied in Word format for easy editing so that you can create your own tests
- Supplied in pdf format for easy printing so that you can produce tests quickly
- Each question is precisely mapped to a concept in the Australian Curriculum
- Web links are provided with each answer so that teachers and students can do research on each topic
- Unlimited and on-going school site licence for the printing and / or electronic use of all questions and answers

Please mark (X) those required.

| | 99 Multiple Choice Questions with detailed answers, web links and Australian Curriculum references | Price | | 99 Multiple Choice Questions with detailed answers, web links and Australian Curriculum references | Price |
|--|---|---------|--|--|---------|
| | Year 9 Mathematics Download sample questions http://bit.ly/2y5Pwr9 | \$50.00 | | Year 10 Mathematics Download sample questions http://bit.ly/2kuN8pa | \$50.00 |

Total Amount = \$ _____ (All prices include GST)

Email to kilbaha@gmail.com

Multiple Choice Questions Mathematics Years 10, 11, 12

Kilbaha Education (Est. 1978) (ABN 47 065 111 373)
PO Box 2227
Kew Vic 3101
Australia

Tel: (03) 9018 5376

Email: kilbaha@gmail.com
Web: <https://kilbaha.com.au>

SCHOOL ORDER NUMBER (required) _____ DATE _____

NAME _____

SCHOOL _____

ADDRESS _____

POSTCODE _____ TEL _____

EMAIL _____

For each topic, you get

- 20 Multiple Choice Questions with answers
- PDF file for easy printing
- WORD file for easy editing
- Student Answer sheet
- Teacher Answer Sheet
- School Site Licence for electronic use
- School Site Licence for printing and hard copy use

Please mark (X) those required.

| Topic | Price | Topic | Price |
|---------------------------------|-------|--|-------|
| Number Systems | \$10 | Logic | \$10 |
| Financial Arithmetic | \$10 | Algebra | \$10 |
| Vectors | \$10 | Quadratics | \$10 |
| Trigonometric Applications | \$10 | Co-ordinate Geometry – The Straight Line | \$10 |
| Sequences and Series | \$10 | Limits and Differentiation | \$10 |
| Matrices | \$10 | Calculus | \$10 |
| Sets | \$10 | Calculus (Differentiation) | \$10 |
| Combinatorics | \$10 | Graphs | \$10 |
| Simple Probability | \$10 | Calculus (Integration) | \$10 |
| Arithmetic Sequences and Series | \$10 | Exponentials | \$10 |
| Probability Distributions | \$10 | Logarithmic Functions | \$10 |

Total Amount = \$ _____ (All prices include GST)

Email to kilbaha@gmail.com

Mathematics for the Australian Curriculum. Essential. General. Methods. Specialist.

| | |
|--|--|
| Kilbaha Education (Est. 1978) (ABN 47 065 111 373) PO Box 2227 Kew Vic 3101 Australia | Tel: (03) 9018 5376 Email: kilbaha@gmail.com Web: https://kilbaha.com.au |
|--|--|

SCHOOL ORDER NUMBER (required) _____ DATE _____

NAME _____

SCHOOL _____

ADDRESS _____

POSTCODE _____ TEL _____

EMAIL _____

Features of these Australian Curriculum Multiple Choice Questions

- Comprehensive coverage of the Australian Curriculum for **Essential Mathematics** for each unit
- Comprehensive coverage of the Australian Curriculum for **General Mathematics** for each unit
- Comprehensive coverage of the Australian Curriculum for **Mathematical Methods** for each unit
- Comprehensive coverage of the Australian Curriculum for **Specialist Mathematics** for each unit
- 50 multiple choice questions with answers for each unit.
- Written by experienced, practising teachers.
- Supplied in WORD format for easy editing so that you can create your own tests.
- Supplied in PDF format for easy printing so that you can produce tests quickly.
- Each question is precisely mapped to a concept in the Australian Curriculum.
- Unlimited and on-going school site licence for the printing and / or electronic use of all questions.

Please mark (X) those required.

| | Australian Curriculum Subject | Year Level | Number of MCQs | Price |
|----|-------------------------------|------------|----------------|-------|
| 1 | Essential Mathematics | Unit 1 | 50 | \$30 |
| 2 | Essential Mathematics | Unit 2 | 50 | \$30 |
| 3 | Essential Mathematics | Unit 3 | 50 | \$30 |
| 4 | Essential Mathematics | Unit 4 | 50 | \$30 |
| 5 | General Mathematics | Unit 1 | 50 | \$30 |
| 6 | General Mathematics | Unit 2 | 50 | \$30 |
| 7 | Mathematical Methods | Unit 1 | 50 | \$30 |
| 8 | Mathematical Methods | Unit 2 | 50 | \$30 |
| 9 | Mathematical Methods | Unit 3 | 50 | \$30 |
| 10 | Mathematical Methods | Unit 4 | 50 | \$30 |
| 11 | Specialist Mathematics | Unit 1 | 50 | \$30 |
| 12 | Specialist Mathematics | Unit 2 | 50 | \$30 |
| 13 | Specialist Mathematics | Unit 3 | 50 | \$30 |
| 14 | Specialist Mathematics | Unit 4 | 50 | \$30 |

Total Amount = \$ _____ (All prices include GST)

Email to kilbaha@gmail.com

Buy and download immediately at <https://kilbaha.com.au>

AUSTRALIAN CURRICULUM
200 Multiple Choice Questions

Essential Mathematics

Units 1, 2, 3, 4

| | |
|---|--|
| Kilbaha Education (Est. 1978) (ABN 47 065 111 373) PO Box 2227 Kew Vic 3101 Australia | Tel: (03) 9018 5376 Email: kilbaha@gmail.com Web: https://kilbaha.com.au |
|---|--|

SCHOOL ORDER NUMBER (required) _____ DATE _____

NAME _____

SCHOOL _____

ADDRESS _____

POSTCODE _____ TEL _____

EMAIL _____

Features of these Australian Curriculum Multiple Choice Questions

- Comprehensive coverage of the Australian Curriculum for Essential Mathematics for each unit
- Units 1, 2, 3, 4.
- 50 multiple choice questions with answers for each unit.
- Written by experienced, practising teachers.
- Supplied in WORD format for easy editing so that you can create your own tests.
- Supplied in PDF format for easy printing so that you can produce tests quickly.
- Each question is precisely mapped to a concept in the Australian Curriculum.
- Unlimited and on-going school site licence for the printing and / or electronic use of all questions.

Please mark (X) those required.

| | Australian Curriculum 50 Multiple Choice Questions for each unit | Price |
|--|---|--------------|
| | Unit 1 Essential Mathematics | \$30 |
| | Unit 3 Essential Mathematics | \$30 |

| | Australian Curriculum 50 Multiple Choice Questions for each unit | Price |
|--|---|--------------|
| | Unit 2 Essential Mathematics | \$30 |
| | Unit 4 Essential Mathematics | \$30 |

Total Amount = \$ _____ (All prices include GST)

Email to kilbaha@gmail.com

Buy and download immediately at <https://kilbaha.com.au>

Buy and download immediately at <https://kilbaha.com.au>



AUSTRALIAN CURRICULUM 100 Multiple Choice Questions General Mathematics Units 1 and 2

| | |
|---|--|
| Kilbaha Education (Est. 1978) (ABN 47 065 111 373) PO Box 2227 Kew Vic 3101 Australia | Tel: (03) 9018 5376 Email: kilbaha@gmail.com Web: https://kilbaha.com.au |
|---|--|

SCHOOL ORDER NUMBER (required) _____ DATE _____

NAME _____

SCHOOL _____

ADDRESS _____

POSTCODE _____ TEL _____

EMAIL _____

Features of these Australian Curriculum Multiple Choice Questions

- Comprehensive coverage of the Australian Curriculum for General Mathematics for each unit
- Units 1 and 2.
- 50 multiple choice questions with answers for each unit.
- Written by experienced, practising teachers.
- Supplied in WORD format for easy editing so that you can create your own tests.
- Supplied in PDF format for easy printing so that you can produce tests quickly.
- Each question is precisely mapped to a concept in the Australian Curriculum.
- Unlimited and on-going school site licence for the printing and / or electronic use of all questions.

Please mark (X) those required.

| | Australian Curriculum 50 Multiple Choice Questions for each unit | Price | | Australian Curriculum 50 Multiple Choice Questions for each unit | Price |
|--|---|--------------|--|---|--------------|
| | Unit 1 General Mathematics | \$30 | | Unit 2 General Mathematics | \$30 |

Total Amount = \$ _____ (All prices include GST)

Email to kilbaha@gmail.com

Buy and download immediately at <https://kilbaha.com.au>

Buy and download immediately at <https://kilbaha.com.au>

**AUSTRALIAN CURRICULUM
200 Multiple Choice Questions**

Mathematical Methods

Units 1, 2, 3, 4

| | |
|---|--|
| Kilbaha Education (Est. 1978) (ABN 47 065 111 373) PO Box 2227 Kew Vic 3101 Australia | Tel: (03) 9018 5376 Email: kilbaha@gmail.com Web: https://kilbaha.com.au |
|---|--|

SCHOOL ORDER NUMBER (required) _____ DATE _____

NAME _____

SCHOOL _____

ADDRESS _____

POSTCODE _____ TEL _____

EMAIL _____

Features of these Australian Curriculum Multiple Choice Questions

- Comprehensive coverage of the Australian Curriculum for Mathematical Methods for each unit
- Units 1, 2, 3, 4.
- 50 multiple choice questions with answers for each unit.
- Written by experienced, practising teachers.
- Supplied in WORD format for easy editing so that you can create your own tests.
- Supplied in PDF format for easy printing so that you can produce tests quickly.
- Each question is precisely mapped to a concept in the Australian Curriculum.
- Unlimited and on-going school site licence for the printing and / or electronic use of all questions.

Please mark (X) those required.

| Australian Curriculum 50 Multiple Choice Questions for each unit | | Price | Australian Curriculum 50 Multiple Choice Questions for each unit | | Price |
|--|-----------------------------|-------|--|-----------------------------|-------|
| | Unit 1 Mathematical Methods | \$30 | | Unit 2 Mathematical Methods | \$30 |
| | Unit 3 Mathematical Methods | \$30 | | Unit 4 Mathematical Methods | \$30 |

Total Amount = \$ _____ (All prices include GST)

Email to kilbaha@gmail.com

Buy and download immediately at <https://kilbaha.com.au>

Buy and download immediately at <https://kilbaha.com.au>



AUSTRALIAN CURRICULUM 200 Multiple Choice Questions

Specialist Mathematics

Units 1, 2, 3, 4

| | |
|---|--|
| Kilbaha Education (Est. 1978) (ABN 47 065 111 373) PO Box 2227 Kew Vic 3101 Australia | Tel: (03) 9018 5376 Email: kilbaha@gmail.com Web: https://kilbaha.com.au |
|---|--|

SCHOOL ORDER NUMBER (required) _____ DATE _____

NAME _____

SCHOOL _____

ADDRESS _____

POSTCODE _____ TEL _____

EMAIL _____

Features of these Australian Curriculum Multiple Choice Questions

- Comprehensive coverage of the Australian Curriculum for Specialist Mathematics for each unit
- Units 1, 2, 3, 4.
- 50 multiple choice questions with answers for each unit.
- Written by experienced, practising teachers.
- Supplied in WORD format for easy editing so that you can create your own tests.
- Supplied in PDF format for easy printing so that you can produce tests quickly.
- Each question is precisely mapped to a concept in the Australian Curriculum.
- Unlimited and on-going school site licence for the printing and / or electronic use of all questions.

Please mark (X) those required.

| Australian Curriculum 50 Multiple Choice Questions for each unit | | Price | Australian Curriculum 50 Multiple Choice Questions for each unit | | Price |
|--|-------------------------------|-------|--|-------------------------------|-------|
| <input type="checkbox"/> | Unit 1 Specialist Mathematics | \$30 | <input type="checkbox"/> | Unit 2 Specialist Mathematics | \$30 |
| <input type="checkbox"/> | Unit 3 Specialist Mathematics | \$30 | <input type="checkbox"/> | Unit 4 Specialist Mathematics | \$30 |

Total Amount = \$ _____ (All prices include GST)

Email to kilbaha@gmail.com

Buy and download immediately at <https://kilbaha.com.au>

AUSTRALIAN CURRICULUM Tests and Mark Books MATHEMATICS Years 5, 6, 7, 8, 9, 10, 10A

| | |
|---|--|
| Kilbaha Education (Est. 1978) (ABN 47 065 111 373) PO Box 2227 Kew Vic 3101 Australia | Tel: (03) 9018 5376 Email: kilbaha@gmail.com Web: https://kilbaha.com.au |
|---|--|

SCHOOL ORDER NUMBER (required) _____ DATE _____

NAME _____

SCHOOL _____

ADDRESS _____

POSTCODE _____ TEL _____

EMAIL _____

Features of each of these Australian Curriculum Mathematics Tests and Mathematics Mark Books

- Comprehensive coverage of the Australian Curriculum for Mathematics for each level
- Years 5, 6, 7, 8, 9, 10, 10A.
- **30 multiple choice questions with detailed answers (30 × 1 = 30 marks.)**
- **40 short answer questions with detailed answers (20 × 1 = 20 marks), (10 × 2 = 20 marks), (10 × 3 = 30 marks).**
- Supplied in WORD format for easy editing so that you can create your own tests.
- Also supplied in PDF format for easy printing so that you can produce tests quickly.
- Each question is precisely mapped to a concept in the Australian Curriculum.
- Detailed answers to every question.
- Web links with every answer so that you can do research on each curriculum topic.
- Mark Books are supplied in EXCEL, WORD and PDF formats so that you can record your students' progress.
- Unlimited and on-going school site licence for the printing and / or electronic use of all Tests and Mark Books
- *Do you need these tests today? Buy online and download immediately.*
- Buy online here <https://kilbaha.com.au/Australian-Curriculum-Tests/Australian-Curriculum-Mathematics>

Please mark (X) those required.

| Australian Curriculum Tests | | Price |
|-----------------------------|--------------------|-------|
| Year 5 Mathematics | <i>(165 pages)</i> | \$30 |
| Year 5 Mark Book | | \$10 |
| Year 7 Mathematics | <i>(165 pages)</i> | \$30 |
| Year 7 Mark Book | | \$10 |
| Year 9 Mathematics | <i>(165 pages)</i> | \$30 |
| Year 9 Mark Book | | \$10 |
| Year 10A Mathematics | <i>(166 pages)</i> | \$30 |
| Year 10A Mark Book | | \$10 |

| Australian Curriculum Tests | | Price |
|-----------------------------|--------------------|-------|
| Year 6 Mathematics | <i>(166 pages)</i> | \$30 |
| Year 6 Mark Book | | \$10 |
| Year 8 Mathematics | <i>(165 pages)</i> | \$30 |
| Year 8 Mark Book | | \$10 |
| Year 10 Mathematics | <i>(164 pages)</i> | \$30 |
| Year 10 Mark Book | | \$10 |

Total Amount = \$ _____ (All prices include GST)

Email to kilbaha@gmail.com

All Kilbaha NAPLAN Trial Tests 2009 – 2021 Mathematics

Paper based and interactive tests.

Unlimited school site licence to reproduce for all teachers and students

| | |
|--|--|
| Kilbaha Education (Est. 1978) (ABN 47 065 111 373) PO Box 2227 Kew Vic 3101 Australia | Tel: (03) 9018 5376 Email: kilbaha@gmail.com Web: https://kilbaha.com.au |
|--|--|

SCHOOL ORDER NUMBER (required) _____ DATE _____

NAME _____

SCHOOL _____

ADDRESS _____

POSTCODE _____ TEL _____

EMAIL _____

Please mark (X) those required.

| All Kilbaha Mathematics NAPLAN Trial Tests 2009 – 2021 with detailed answers <i>School site licence for all teachers and students for printing and sharing on all electronic devices.</i> | Package Price |
|---|----------------------|
| Year 3 – 12 sets of original test questions with detailed answers and responses. Numeracy. <i>Normal cost = \$20 × 12 = \$240</i> | \$99.95 |
| Year 5 – 12 sets of original test questions with detailed answers and responses. Numeracy. <i>Normal cost = \$20 × 12 = \$240</i> | \$99.95 |
| Year 7 – 20 sets of original test questions with detailed answers and responses. Numeracy Calculator and Non-Calculator. <i>Normal cost = \$20 × 20 = \$400</i> | \$99.95 |
| Year 9 – 20 sets of original test questions with detailed answers and responses. Numeracy Calculator and Non-Calculator. <i>Normal cost = \$20 × 20 = \$400</i> | \$99.95 |

Total Amount = \$ _____ (All prices include GST)

Email to kilbaha@gmail.com

Detailed Answers to ALL ACARA NUMERACY NAPLAN TESTS 2008 – 2021

Download the questions at the links below.

<https://www.acara.edu.au/assessment/naplan/naplan-2008-2011-test-papers>

<https://www.acara.edu.au/assessment/naplan/naplan-2012-2016-test-papers>

Unlimited school site licence to reproduce for all teachers and students

| | |
|--|--|
| Kilbaha Education (Est. 1978) (ABN 47 065 111 373) PO Box 2227 Kew Vic 3101 Australia | Tel: (03) 9018 5376 Email: kilbaha@gmail.com Web: https://kilbaha.com.au |
|--|--|

SCHOOL ORDER NUMBER (required) _____ DATE _____

NAME _____

SCHOOL _____

ADDRESS _____

POSTCODE _____ TEL _____

EMAIL _____

Please mark (X) those required.

| Detailed answers to ALL ACARA NUMERACY NAPLAN TESTS 2008 – 2021 <i>(Questions not included)</i> | Price |
|---|---------|
| Year 3 School site licence for all teachers and students for printing and sharing on all electronic devices. | \$99.95 |
| Year 5 School site licence for all teachers and students for printing and sharing on all electronic devices. | \$99.95 |
| Year 7 School site licence for all teachers and students for printing and sharing on all electronic devices. | \$99.95 |
| Year 9 School site licence for all teachers and students for printing and sharing on all electronic devices. | \$99.95 |

Total Amount = \$ _____ (All prices include GST)

Email to kilbaha@gmail.com

Buy and download immediately at <https://kilbaha.com.au>

2022 Kilbaha NAPLAN Numeracy Trial Tests PAPER USE and COMPUTER USE Automatic Marking

School site licence to reproduce for all teachers and students

Electronic files supplied in WORD, PDF and Interactive PDF for use on all computers.
Questions are marked automatically.

The 2022 Kilbaha NAPLAN Numeracy Trial Tests are supplied with detailed answers.

| | |
|---|--|
| Kilbaha Education (Est. 1978) (ABN 47 065 111 373) PO Box 2227 Kew Vic 3101 Australia | Tel: +613 9018 5376 Email: kilbaha@gmail.com Web: https://kilbaha.com.au |
|---|--|

SCHOOL ORDER NUMBER (required) _____ DATE _____

NAME _____

SCHOOL _____

ADDRESS _____

POSTCODE _____ TEL _____

EMAIL _____

Please mark (X) those required.

| 2022 Kilbaha NAPLAN Numeracy Trial Tests with detailed answers. Electronic files for Paper and Computer Use. Marked automatically. | Price | 2022 Kilbaha NAPLAN Numeracy Trial Tests with detailed answers. Electronic files for Paper and Computer Use. Marked automatically. | Price |
|--|-------|--|-------|
| Year 3 Numeracy | \$30 | Year 5 Numeracy | \$30 |
| Year 7 Numeracy | \$30 | Year 9 Numeracy | \$30 |

Total Amount = \$ _____ (All prices include GST)

Email to kilbaha@gmail.com



50 Number Problems and 50 Word Problems for Primary and Junior Secondary

| | |
|--|--|
| Kilbaha Education (Est. 1978) ABN 47 065 111 373 PO Box 2227 Kew Vic 3101 Australia | Tel: +613 9018 5376 Email: kilbaha@gmail.com Web: https://kilbaha.com.au |
|--|--|

SCHOOL ORDER NUMBER (required) _____ DATE _____

NAME _____

SCHOOL _____

ADDRESS _____

POSTCODE _____ TEL _____

EMAIL _____

- 50 Interactive Number Problems for Primary and Junior Secondary Students.
- 50 Interactive Word Problems for Primary and Junior Secondary Students.
- Automatic marking for all problems.
- **Challenge your students to get all 50 questions correct on the first attempt!**
- School site licence.
- Great diagnostic tools for your mathematics classes.
- Both titles work on **any computer** using the free Adobe Reader from <https://get.adobe.com/reader/>
- Free answer sheets for both titles supplied for teachers.

Please mark (X) those required.

| | Title | Price |
|--|--|-------|
| | What Number Am I? 50 interactive graded Number Problems for Primary and Junior Secondary Students. Whole numbers, fractions, mixed numbers. | \$30 |
| | Mathematics Word Problems. Multiplication, Addition, Division, Subtraction 50 interactive Word Problems for Primary and Junior Secondary Students – 10 simple multiplication problems, 10 simple division problems, 30 other word problems involving remainders, mixtures of operations, lowest common multiple, logic. | \$30 |

Total Amount = \$ _____ (All prices include GST)

Email to kilbaha@gmail.com

Number and Algebra Geometry and Measurement Statistics and Probability Years 9 and 10

| | |
|--|--|
| Kilbaha Education (Est. 1978) ABN 47 065 111 373 PO Box 2227 Kew Vic 3101 Australia | Tel: +613 9018 5376 Email: kilbaha@gmail.com Web: https://kilbaha.com.au |
|--|--|

SCHOOL ORDER NUMBER (required) _____ DATE _____

NAME _____

SCHOOL _____

ADDRESS _____

POSTCODE _____ TEL _____

EMAIL _____

- Interactive multiple-choice questions on Number and Algebra, Geometry and Measurement, Statistics and Probability for Year 9
- Interactive multiple-choice questions on Number and Algebra, Geometry and Measurement, Statistics and Probability for Year 10
- Detailed answers and explanations for all questions
- Automatic marking for all questions
- Australian Curriculum references for all questions
- School site licence for print and electronic use
- All titles work on **any computer** using the free Adobe Reader from <https://get.adobe.com/reader/>

Please mark (X) those required.

| | Title | Price |
|--|--|-------|
| | Year 9 Number and Algebra. 33 interactive questions. Automatic marking. Detailed answers. Curriculum references. | \$30 |
| | Year 9 Geometry and Measurement. 33 interactive questions. Automatic marking. Detailed answers. Curriculum references. | \$30 |
| | Year 9 Statistics and Probability. 33 interactive questions. Automatic marking. Detailed answers. Curriculum references. | \$30 |
| | Year 10 Number and Algebra. 33 interactive questions. Automatic marking. Detailed answers. Curriculum references. | \$30 |
| | Year 10 Geometry and Measurement. 33 interactive questions. Automatic marking. Detailed answers. Curriculum references. | \$30 |
| | Year 10 Statistics and Probability. 33 interactive questions. Automatic marking. Detailed answers. Curriculum references. | \$30 |

Total Amount = \$ _____ (All prices include GST)

Email to kilbaha@gmail.com

Olympics Mathematics

| | |
|--|---|
| Kilbaha Education (Est. 1978) ABN 47 065 111 373 PO Box 2227 Kew Vic 3101 Australia | Tel: (03) 9018 5376 Email: kilbaha@gmail.com Web: https://kilbaha.com.au |
|--|---|

SCHOOL ORDER NUMBER (required) _____ **DATE** _____

NAME _____

SCHOOL _____

ADDRESS _____

POSTCODE _____ **TEL** _____

EMAIL _____

- Mathematics project workbooks – exciting mathematics for the classroom
- Use the PDF file as mathematics work for one week based on the Olympics
- Use the WORD file to modify the workbooks for your classes
- Classroom trials show that students love doing these projects
- Each workbook provides a maths activity lasting one week (including homework)
- Teaching notes and answers included
- Print as many copies as you need. School site licence.
- Proven workbooks that students really enjoy using while learning heaps of great mathematics
- All workbooks supplied in both WORD format for easy editing and PDF format for easy printing
- School site licence is included.
- Print hard copies or modify the files for suit your class.
- Add to your school Intranet or put on all devices in your classroom.

Please mark (X) those required.

| | | |
|--|---|------|
| | In the Running for the Olympics (58 pages) (Recommended for Classes 5 – 8) | \$30 |
| | In Training for the Olympics (57 pages) (Recommended for Classes 6 – 9) | \$30 |
| | In Search of the Holy Grail (Based on a Medieval Theme) (32 pages) (Recommended for Classes 7 – 10) | \$30 |

Total Amount = \$ _____ **(All prices include GST)**

Email to kilbaha@gmail.com

MATHEMATICS TEXT BOOKS

Detailed Answers

| | |
|--|--|
| Kilbaha Education (Est. 1978) (ABN 47 065 111 373) PO Box 2227 Kew Vic 3101 Australia | Tel: (03) 9018 5376 Email: kilbaha@gmail.com Web: https://kilbaha.com.au |
|--|--|

SCHOOL ORDER NUMBER (required) _____ DATE _____

NAME _____

SCHOOL _____

ADDRESS _____

POSTCODE _____ TEL _____

EMAIL _____

- Detailed worked solutions to the questions in these well-known mathematics text books.
- Many hundreds of pages of hand written detailed solutions for each textbook
- Many thousands of questions answered in detail for each textbook
- Supplied in PDF format
- These worked solutions are great resources for students studying mathematics.
- School site licence to use in printed format and electronic format on all devices

Please mark (X) those required.

| Detailed hand written worked solutions to these mathematics texts. | Details about the books containing the questions for these detailed hand written worked solutions can be obtained at the links below. | Price |
|--|--|-------|
| Pure Mathematics | https://trove.nla.gov.au/version/11592393 | \$50 |
| Applied Mathematics | https://trove.nla.gov.au/version/45425889 | \$50 |
| Mathematics A | https://trove.nla.gov.au/work/19103580 | \$50 |
| Mathematics B | https://trove.nla.gov.au/version/45427691 | \$50 |
| Mathematical Methods | https://trove.nla.gov.au/version/29722426 https://trove.nla.gov.au/version/18258645 | \$50 |
| Specialist Mathematics | https://trove.nla.gov.au/version/45477957 https://trove.nla.gov.au/version/45625913 | \$50 |
| Reasoning and Data | https://trove.nla.gov.au/version/45226812 | \$50 |
| Change and Approximation | https://trove.nla.gov.au/version/45224072 | \$50 |
| New Senior Mathematics 3 Unit | https://trove.nla.gov.au/work/21897325 | \$50 |
| New Senior Mathematics 4 Unit | https://trove.nla.gov.au/work/6673074 | \$50 |

Total Amount = \$ _____ (All prices include GST)

Email to kilbaha@gmail.com

MODERN MATHEMATICS 6 PURE MATHEMATICS Detailed Answers

| | |
|---|--|
| Kilbaha Education (Est. 1978) (ABN 47 065 111 373) PO Box 2227 Kew Vic 3101 Australia | Tel: (03) 9018 5376 Email: kilbaha@gmail.com Web: https://kilbaha.com.au |
|---|--|

SCHOOL ORDER NUMBER (required) _____ DATE _____

NAME _____

SCHOOL _____

ADDRESS _____

POSTCODE _____ TEL _____

EMAIL _____

Detailed worked solutions to questions in this well known Mathematics Text Book.
 This is a great resource for students revising for end of year mathematics examinations.
 The questions for these detailed answers are contained in this book:

MODERN MATHEMATICS 6 PURE MATHEMATICS
 J.B. Fitzpatrick and P.L. Galbraith
 First Published 1971 by THE JACARANDA PRESS
 Third Edition 1980
 ISBN 0 7016 1410 2

The book with the questions can be obtained here:
<http://trove.nla.gov.au/version/11592393>

Please mark (X) those required.

| Detailed Answers to these Chapters | Price | Detailed Answers to these Chapters | Price |
|---|-------|---|-------|
| 1. Basic Algebra | \$5 | 8. Logarithmic and Exponential Functions | \$5 |
| 2. Algebra of Functions | \$5 | 9. Analytical Geometry | \$5 |
| 3. Circular and Inverse Circular Functions | \$5 | 12. Permutations and Combinations | \$5 |
| 4. Differential Calculus | \$5 | 13. Probability | \$5 |
| 5. Curve Sketching. Maxima and Minima | \$5 | 14. Normal Distribution | \$5 |
| 6. Derivatives of Circular & Inverse Circular Functions | \$5 | 15. Binomial and Hypergeometric Distributions | \$5 |
| 7. Antidifferentiation and Integral Calculus | \$5 | 16. Poisson Distribution | \$5 |

Total Amount = \$ _____ (All prices include GST)

Email to kilbaha@gmail.com

MODERN MATHEMATICS 6 APPLIED MATHEMATICS Detailed Answers

| | |
|---|--|
| Kilbaha Education (Est. 1978) (ABN 47 065 111 373) PO Box 2227 Kew Vic 3101 Australia | Tel: (03) 9018 5376 Email: kilbaha@gmail.com Web: https://kilbaha.com.au |
|---|--|

SCHOOL ORDER NUMBER (required) _____ DATE _____

NAME _____

SCHOOL _____

ADDRESS _____

POSTCODE _____ TEL _____

EMAIL _____

Detailed worked solutions to questions in this well known Mathematics Text Book.
 This is a great resource for students revising for end of year mathematics examinations.
 The questions for these detailed answers are contained in this book:
MODERN MATHEMATICS 6 APPLIED MATHEMATICS
 J.B. Fitzpatrick and P.L. Galbraith
 First Published 1972 by THE JACARANDA PRESS
 Third Edition 1980
 ISBN 0 7016 1411 0

The book with the questions can be obtained here:
<http://trove.nla.gov.au/version/45425889>

Please mark (X) those required.

| Detailed Answers to these Chapters | Price | Detailed Answers to these Chapters | Price |
|--|-------|--|-------|
| 1. Introduction to Vectors | \$5 | 7. Statics of a Particle | \$5 |
| 2. Position Vectors and Applications | \$5 | 8. Statics of a Rigid Body | \$5 |
| 3. Scalar Product of Vectors | \$5 | 9. Dynamics | \$5 |
| 4. Applications of Differentiation | \$5 | 10. Circular Motion | \$5 |
| 5. Kinematics | \$5 | 11. Hooke's Law and Simple Harmonic Motion | \$5 |
| 6. Vector Calculus and Projectile Motion | \$5 | | |

Total Amount = \$ _____ (All prices include GST)

Email to kilbaha@gmail.com

MATHEMATICS A YEAR 12

Detailed Answers

| | |
|---|--|
| Kilbaha Education (Est. 1978) (ABN 47 065 111 373) PO Box 2227 Kew Vic 3101 Australia | Tel: (03) 9018 5376 Email: kilbaha@gmail.com Web: https://kilbaha.com.au |
|---|--|

SCHOOL ORDER NUMBER (required) _____ **DATE** _____

NAME _____

SCHOOL _____

ADDRESS _____

POSTCODE _____ **TEL** _____

EMAIL _____

Detailed worked solutions to questions in this well known Mathematics Text Book. This is a great resource for students revising for end of year mathematics examinations. The questions for these detailed answers are contained in this book:

MATHEMATICS A YEAR 12
 J.B. Fitzpatrick and P.L. Galbraith
 First Published 1985 by THE JACARANDA PRESS
 ISBN 0 7016 1927 9

The book with the questions can be obtained here:
<https://trove.nla.gov.au/work/19103580?key=word=0701619279>

Please mark (X) those required.

| Detailed Answers to these Chapters | Price | | Detailed Answers to these Chapters | Price |
|--|-------|--|---|-------|
| 1. Mensuration | \$5 | | 10. Arrangements and Selections | \$5 |
| 2. Algebra of Functions | \$5 | | 11. Binomial and Hypergeometric Distributions | \$5 |
| 3. Circular (trigonometric) Functions | \$5 | | 12. Geometric and Poisson Distributions | \$5 |
| Revision Exercises A | \$5 | | Revision Exercises C | \$5 |
| 4. Differential Calculus | \$5 | | Test Papers | \$5 |
| 5. Rates of Change | \$5 | | 13. Variation | \$5 |
| 6. Curve Sketching: Maxima and Minima | \$5 | | 14. Sequences and Series | \$5 |
| 7. Antidifferentiation and Integral Calculus | \$5 | | 15. Exponential Growth | \$5 |
| 8. Exponential and Logarithmic Functions | \$5 | | 16. Linear Programming | \$5 |
| Revision Exercises B | \$5 | | 17. Sequences & Series (arithmetic & geometric) | \$5 |
| 9. Probability | \$5 | | 18. Time Series | \$5 |

Total Amount = \$_____ (All prices include GST)

Email to kilbaha@gmail.com

MATHEMATICS B YEAR 12

Detailed Answers

| | |
|---|--|
| Kilbaha Education (Est. 1978) (ABN 47 065 111 373) PO Box 2227 Kew Vic 3101 Australia | Tel: (03) 9018 5376 Email: kilbaha@gmail.com Web: https://kilbaha.com.au |
|---|--|

SCHOOL ORDER NUMBER (required) _____ **DATE** _____

NAME _____

SCHOOL _____

ADDRESS _____

POSTCODE _____ **TEL** _____

EMAIL _____

Detailed worked solutions to questions in this well known Mathematics Text Book. This is a great resource for students revising for end of year mathematics examinations. The questions for these detailed answers are contained in this book:

MATHEMATICS B YEAR 12
 J.B. Fitzpatrick and P.L. Galbraith
 First Published 1985 by THE JACARANDA PRESS
 ISBN 0 7016 1928 7

The book with the questions can be obtained here:
<http://trove.nla.gov.au/version/45427691>

Please mark (X) those required.

| Detailed Answers to these Chapters | Price | Detailed Answers to these Chapters | Price |
|--|-------|--|-------|
| 1. Linear Algebra | \$5 | Revision Exercises B | \$5 |
| 2. Complex Numbers | \$5 | Test Papers | \$5 |
| 3. Introduction to Vectors | \$5 | 12. Projectile Motion and Circular Motion | \$5 |
| 4. Scalar Product of Vectors | \$5 | 13. Hooke's Law and Simple Harmonic Motion | \$5 |
| Revision Exercises A | \$5 | Revision Exercises M | \$5 |
| 5. Antidifferentiation and Integral Calculus | \$5 | 14. Continuous Probability Distributions | \$5 |
| 6. Differential Equations | \$5 | 15. Transformation Geometry | \$5 |
| 7. Kinematics | \$5 | 17. Logic and Reasoning | \$5 |
| 8. Analytical Geometry | \$5 | | |

Total Amount = \$ _____ (All prices include GST)

Email to kilbaha@gmail.com

MATHEMATICAL METHODS

UNITS 3 AND 4

Detailed Answers

| | |
|---|--|
| Kilbaha Education (Est. 1978) (ABN 47 065 111 373) PO Box 2227 Kew Vic 3101 Australia | Tel: (03) 9018 5376 Email: kilbaha@gmail.com Web: https://kilbaha.com.au |
|---|--|

SCHOOL ORDER NUMBER (required) _____ DATE _____

NAME _____

SCHOOL _____

ADDRESS _____

POSTCODE _____ TEL _____

EMAIL _____

Detailed worked solutions to questions in these well known Mathematics Text Books. This is a great resource for students revising for end of year mathematics examinations. The questions for these detailed answers are contained in these books:

MATHEMATICAL METHODS 3 AND 4
 J.B. Fitzpatrick, P.L. Galbraith, Bruce Henry
 First Published 1993 by RIGBY HEINEMANN
 First Edition 1993 ISBN 0 85859 698 9
 Second Edition 1997 ISBN 0 85859 935 X

The books with the questions can be obtained here:
<http://trove.nla.gov.au/version/29722426>
<http://trove.nla.gov.au/version/18258645>

Please mark (X) those required.

| | Detailed Answers to these Chapters (Number of questions shown in brackets) | Price | | Detailed Answers to these Chapters (Number of questions shown in brackets) | Price |
|--|---|-------|--|---|-------|
| | 1. Algebra (216) | \$5 | | 8. Discrete Random Variables (52) | \$5 |
| | 2. Functions (217) | \$5 | | 9. Binomial & Hypergeometric Distributions (146) | \$5 |
| | 3. Circular Functions (451) | \$5 | | 10. Normal Distribution (74) | \$5 |
| | 4. Differential Calculus (229) | \$5 | | 11. Sampling and Estimation (69) | \$5 |
| | 5. Applications of Differentiation (146) | \$5 | | Revision Exercises A, B and C (126) | \$5 |
| | 6. Integral Calculus (76) | \$5 | | CATS Multiple Choice and Analysis Tasks (123) | \$5 |
| | 7. Exponential and Logarithmic Functions (210) | \$5 | | Detailed answers to the new problems in the second edition of Mathematical Methods 3 and 4 (58 pages) | \$5 |

Total Amount = \$ _____ (All prices include GST)

Email to kilbaha@gmail.com

SPECIALIST MATHEMATICS UNITS 3 AND 4 Detailed Answers

| | |
|---|--|
| Kilbaha Education (Est. 1978) (ABN 47 065 111 373) PO Box 2227 Kew Vic 3101 Australia | Tel: (03) 9018 5376 Email: kilbaha@gmail.com Web: https://kilbaha.com.au |
|---|--|

SCHOOL ORDER NUMBER (required) _____ DATE _____

NAME _____

SCHOOL _____

ADDRESS _____

POSTCODE _____ TEL _____

EMAIL _____

Detailed worked solutions to questions in these well known Mathematics Text Books.
 This is a great resource for students revising for end of year mathematics examinations.
 The questions for these detailed answers are contained in these books:

SPECIALIST MATHEMATICS
 J.B. Fitzpatrick, P.L. Galbraith, Bruce Henry
 First Published 1993 by RIGBY HEINEMANN
 First Edition 1993 ISBN 0 85859 697 0
 Second Edition 1997 ISBN 0 86462 080 2

The books with the questions can be obtained here:
<http://trove.nla.gov.au/version/45477957>
<http://trove.nla.gov.au/version/45625913>

Please mark (X) those required.

| | Detailed Answers to these Chapters (First Edition) (Number of questions shown in brackets) | Price | | Detailed Answers to these Chapters (First Edition) (Number of questions shown in brackets) | Price |
|--|--|-------|--|---|-------|
| | 1. Circular Functions (217) | \$5 | | 12. Dynamics (191) | \$5 |
| | 2. Complex Numbers (256) | \$5 | | 13. Statics (48) | \$5 |
| | 3. Vectors (246) | \$5 | | 14. Vector Calculus (135) | \$5 |
| | 4. Rational Functions (46) | \$5 | | 15. Simple Harmonic Motion (84) | \$5 |
| | 5. Differentiation and Antidifferentiation (234) | \$5 | | Revision Exercise A (40) | \$5 |
| | 6. Integral Calculus (242) | \$5 | | Revision Exercise B (81) | \$5 |
| | 7. Differential Equations (173) | \$5 | | CATS Multiple Choice and Analysis Tasks (78) | \$5 |
| | 8. Kinematics (190) | \$5 | | Detailed answers to the new problems in the second edition of Specialist Mathematics (88 pages) | \$5 |

Total Amount = \$ _____ (All prices include GST)

Email to kilbaha@gmail.com

REASONING AND DATA

Detailed Answers

| | |
|---|--|
| Kilbaha Education (Est. 1978) (ABN 47 065 111 373) PO Box 2227 Kew Vic 3101 Australia | Tel: (03) 9018 5376 Email: kilbaha@gmail.com Web: https://kilbaha.com.au |
|---|--|

SCHOOL ORDER NUMBER (required) _____ DATE _____

NAME _____

SCHOOL _____

ADDRESS _____

POSTCODE _____ TEL _____

EMAIL _____

Detailed worked solutions to questions in this well known Mathematics Text Book.
 This is a great resource for students revising for end of year mathematics examinations.
 The questions for these detailed answers are contained in this book:

REASONING AND DATA

J.B. Fitzpatrick, P.L. Galbraith, Bruce Henry
 Published 1990 by HEINEMANN EDUCATIONAL AUSTRALIA
 ISBN 0858595273

The book with the questions can be obtained here:

<http://trove.nla.gov.au/version/45226812>

Please mark (X) those required.

| Detailed Answers to these Chapters (Number of questions shown in brackets) | Price | Detailed Answers to these Chapters (Number of questions shown in brackets) | Price |
|---|-------|---|-------|
| 1. Algebra (216) | \$5 | 8. Discrete Random Variables (52) | \$5 |
| 2. Functions (217) | \$5 | 9. Binomial & Hypergeometric Distributions (146) | \$5 |
| 3. Circular Functions (451) | \$5 | 10. Normal Distribution (74) | \$5 |
| 4. Differential Calculus (229) | \$5 | 11. Sampling and Estimation (69) | \$5 |
| 5. Applications of Differentiation (146) | \$5 | Revision Exercises A, B and C (126) | \$5 |
| 6. Integral Calculus (76) | \$5 | CATS Multiple Choice and Analysis Tasks (123) | \$5 |
| 7. Exponential and Logarithmic Functions (210) | \$5 | | |

Total Amount = \$ _____ (All prices include GST)

Email to kilbaha@gmail.com

CHANGE AND APPROXIMATION

Detailed Answers

| | |
|--|--|
| Kilbaha Education (Est. 1978) (ABN 47 065 111 373) PO Box 2227 Kew Vic 3101 Australia | Tel: (03) 9018 5376 Email: kilbaha@gmail.com Web: https://kilbaha.com.au |
|--|--|

SCHOOL ORDER NUMBER (required) _____ DATE _____

NAME _____

SCHOOL _____

ADDRESS _____

POSTCODE _____ TEL _____

EMAIL _____

Detailed worked solutions to questions in this well known Mathematics Text Book.
 This is a great resource for students revising for end of year mathematics examinations.
 The questions for these detailed answers are contained in this book:
CHANGE AND APPROXIMATION
 J.B. Fitzpatrick, P.L. Galbraith, Bruce Henry
 Published 1989 by HEINEMANN EDUCATIONAL AUSTRALIA
 ISBN 0858595257

The book with the questions can be obtained here:
<http://trove.nla.gov.au/version/45224072>

Please mark (X) those required.

| Detailed Answers to these Chapters (Number of questions shown in brackets) | Price | Detailed Answers to these Chapters (Number of questions shown in brackets) | Cost |
|---|-------|---|------|
| 1. Algebra (216) | \$5 | 8. Discrete Random Variables (52) | \$5 |
| 2. Functions (217) | \$5 | 9. Binomial & Hypergeometric Distributions (146) | \$5 |
| 3. Circular Functions (451) | \$5 | 10. Normal Distribution (74) | \$5 |
| 4. Differential Calculus (229) | \$5 | 11. Sampling and Estimation (69) | \$5 |
| 5. Applications of Differentiation (146) | \$5 | Revision Exercises A, B and C (126) | \$5 |
| 6. Integral Calculus (76) | \$5 | CATS Multiple Choice and Analysis Tasks (123) | \$5 |
| 7. Exponential and Logarithmic Functions (210) | \$5 | | |

Total Amount = \$ _____ (All prices include GST)

Email to kilbaha@gmail.com

Buy and download immediately at <https://kilbaha.com.au>

NEW SENIOR MATHEMATICS Detailed Answers

| | |
|--|--|
| Kilbaha Education (Est. 1978) (ABN 47 065 111 373) PO Box 2227 Kew Vic 3101 Australia | Tel: (03) 9018 5376 Email: kilbaha@gmail.com Web: https://kilbaha.com.au |
|--|--|

SCHOOL ORDER NUMBER (required) _____ DATE _____

NAME _____


SCHOOL _____

ADDRESS _____


POSTCODE _____ TEL _____

EMAIL _____

The questions for these detailed answers are contained in the books:



NEW SENIOR MATHEMATICS
Four Unit Course for Year 12
J.B. Fitzpatrick
ISBN 0 85859 569 9
<https://trove.nla.gov.au/work/6673074>



NEW SENIOR MATHEMATICS
Three Unit Course for Years 11 & 12
J.B. Fitzpatrick
ISBN 0 85859 353 X
<https://trove.nla.gov.au/work/21897325>

Please mark (X) those required.

| | Detailed Answers to New Senior Mathematics: Four Unit Course for Year 12 | Price | | Detailed Answers to New Senior Mathematics: Three Unit Course for Years 11 & 12 | Price |
|--|---|---------|--|--|---------|
| | 1. Graphs | \$19.80 | | 1. Permutations and Combinations | \$19.80 |
| | 2. Complex numbers | \$19.80 | | 2. Inverse Trigonometric Functions | \$19.80 |
| | 3. Conics | \$19.80 | | 3. Applications of Calculus to the World | \$19.80 |
| | 4. Integration | \$19.80 | | 4. Polynomials | \$19.80 |
| | 5. Volumes | \$19.80 | | 5. Calculus | \$19.80 |
| | 6. Mechanics | \$19.80 | | 6. Miscellaneous | \$19.80 |
| | 7. Polynomials | \$19.80 | | | |
| | 8. Advanced 3 Unit Topics | \$19.80 | | | |

Number of chapter solutions = _____ @ \$19.80 = \$ _____

Total Amount = \$ _____ (All prices include GST)

Email to kilbaha@gmail.com

Buy and download immediately at <https://kilbaha.com.au>



Buy and download immediately at <https://kilbaha.com.au>

Kilbaha Education

Quality educational content

AUTHORITY TO CHARGE

STRICTLY CONFIDENTIAL

I hereby authorise Kilbaha Education to debit the following credit card for charges relating to the attached order or the order requested by other means.

Kilbaha Education (Est. 1978) ABN 47 065 111 373
PO Box 2227
Kew Vic 3101
Australia

Tel: +613 9018 5376

Email: kilbaha@gmail.com

Web: <https://kilbaha.com.au>

SCHOOL ORDER NUMBER (if applicable) _____ DATE _____

NAME _____

SCHOOL (if applicable) _____

ADDRESS _____

POSTCODE _____ TEL _____

EMAIL _____

CARD TYPE: MASTERCARD

VISA

CARD NO: _____ EXP: _____ / _____

3 DIGIT SECURITY CODE ON CARD _____

NAME AS SHOWN ON CARD _____

SIGNATURE OR NAME TYPED _____

AMOUNT AUD\$ _____ AMOUNT (other currency) _____

Email to: kilbaha@gmail.com

or

Mail to: PO Box 2227 Kew Vic 3101 Australia